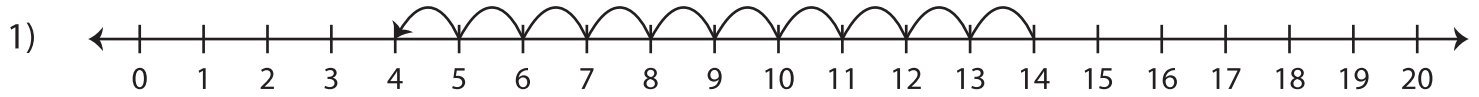
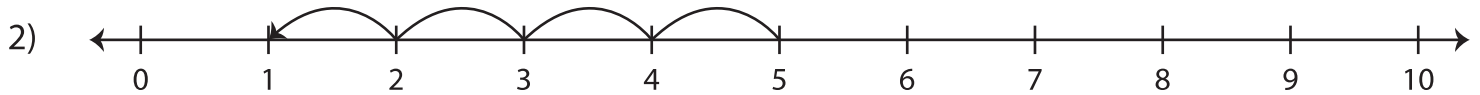


# Number Lines | Subtraction

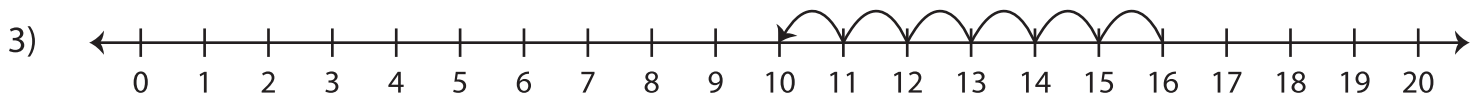
A) Read each number line and find the difference.



$$14 - 10 = \underline{\quad}$$



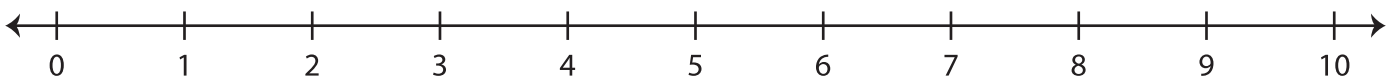
$$5 - 4 = \underline{\quad}$$



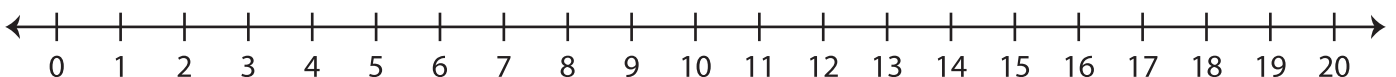
$$16 - 6 = \underline{\quad}$$

B) Indicate hops on each number line and complete the subtraction equation.

1)  $7 - 1 = \underline{\quad}$



2)  $12 - 9 = \underline{\quad}$



3)  $10 - 5 = \underline{\quad}$

