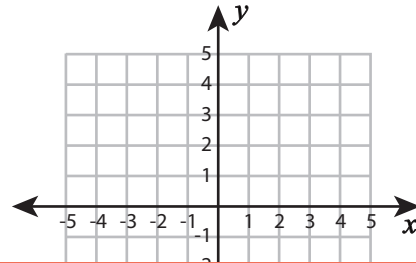
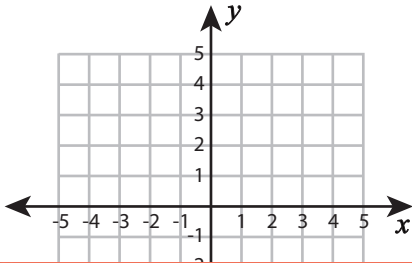


Ordered Pairs | Drawing Shapes

Plot the points and join them in the given order. Complete each figure by connecting the start and endpoints. Identify the shape formed.

1) $(-3, -1), (2, 2), (2, -4)$

2) $(-1, -1), (2, 1), (5, -1), (3, -3), (1, -3)$



Preview

3) $(-4, 3), (-1, 3), (-1, 5), (2, 5), (2, 1), (-4, 1)$

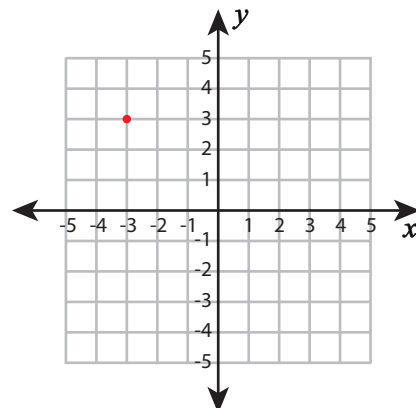
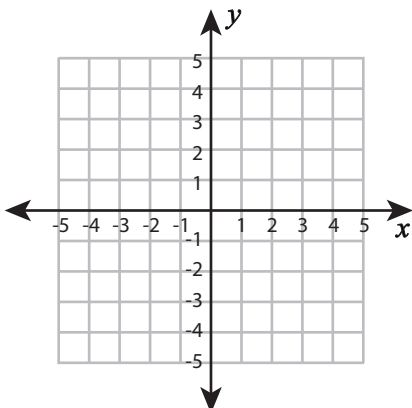
Become a member to unlock
unrestricted access to both printable
and online worksheets.



www.tutoringhour.com

5) $(0, -3), (1, -1), (3, -1), (4, -3), (3, -5), (1, -5)$

6) $(-3, 3), (3, 3), (4, -1), (-2, -1)$



Shape: _____

Shape: _____