



Ordered Pairs | Drawing Shapes

Plot the points and join them in the given order. Complete each figure by connecting the start and endpoints. Identify the shape formed.

1) $(2, 3), (2, 8), (4, 8), (4, 3)$



2) $(4, 3), (4, 7), (8, 7), (8, 3)$



Preview

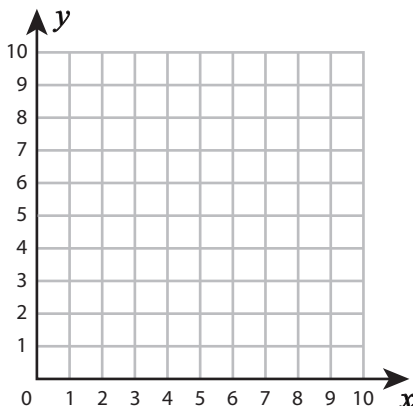
3) $(1,$

Become a member to unlock
unrestricted access to both printable
and online worksheets.



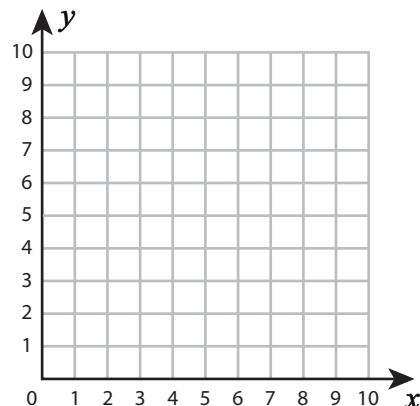
www.tutoringhour.com

5) $(5, 2), (9, 2), (5, 7)$



Shape: _____

6) $(1, 6), (3, 9), (9, 9), (7, 6)$



Shape: _____