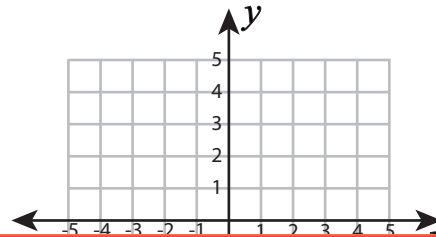
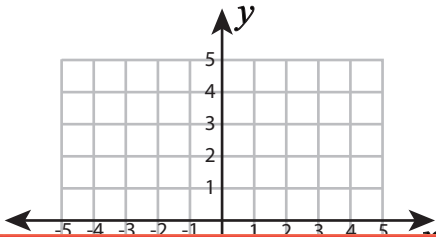


Ordered Pairs

Plot each set of ordered pairs. Join the points, and find the length of the line segment.

1) $(-4, 2), (2, 2)$

2) $(2, -4), (2, 4)$



Preview

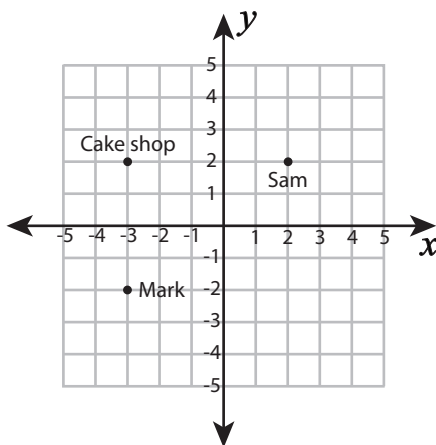
Become a member to unlock
unrestricted access to both printable
and online worksheets.



www.tutoringhour.com

Length of the line segment = _____

Length of the line segment = _____



5) How far is Mark from the cake shop? _____

6) How far is Sam from the cake shop? _____

7) Who is closer to the cake shop, Mark or Sam? _____