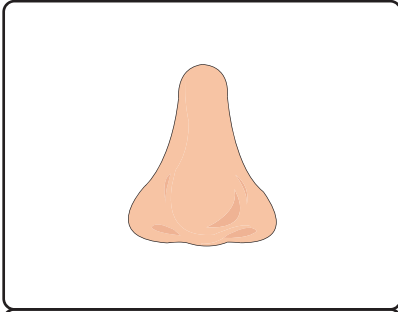


Parts of the Body

Identify each external body part and write its name in the space given.

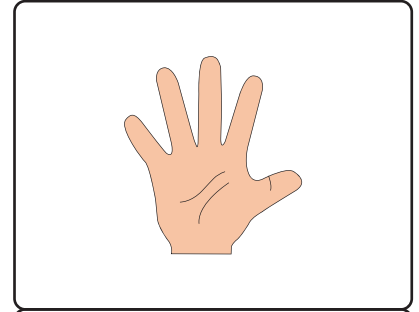
1)



2)



3)



4)


Preview

**Become a member to unlock
unrestricted access to both printable
and online worksheets.**

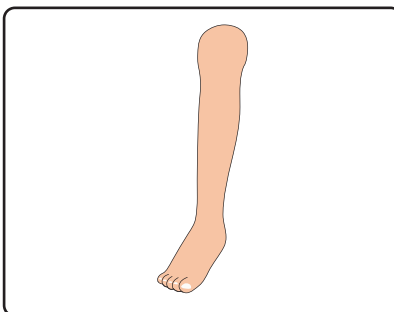


www.tutoringhour.com

7)



8)



9)

