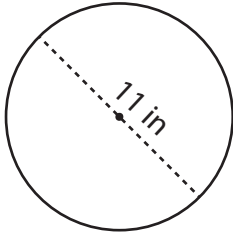


Circumference of a Circle

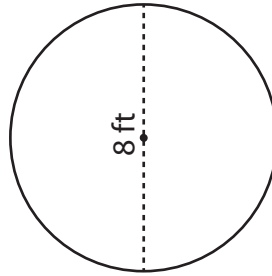
Find the circumference of each circle. Round your answer to the nearest tenth. (use $\pi = 3.14$)

1)



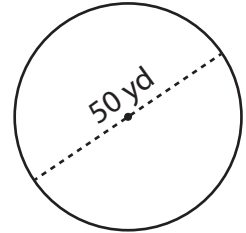
Circumference = _____

2)



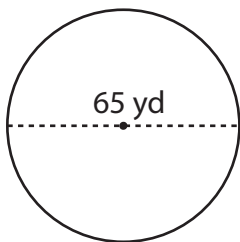
Circumference = _____

3)



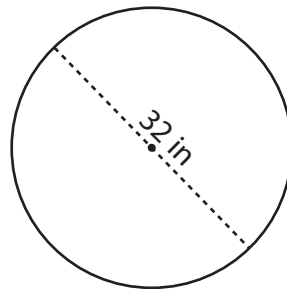
Circumference = _____

4)



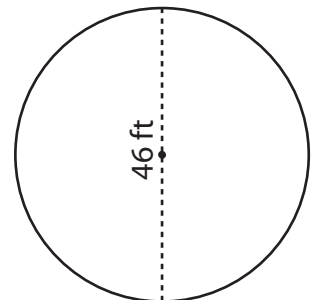
Circumference = _____

5)



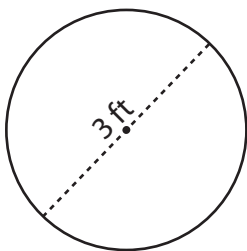
Circumference = _____

6)



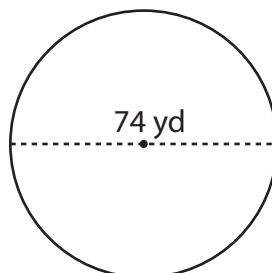
Circumference = _____

7)



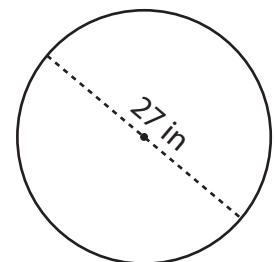
Circumference = _____

8)



Circumference = _____

9)



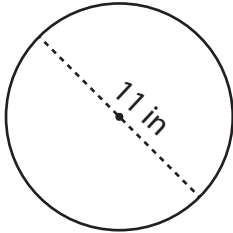
Circumference = _____

Circumference of a Circle

Answer Key

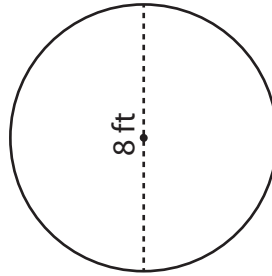
Find the circumference of each circle. Round your answer to the nearest tenth. (use $\pi = 3.14$)

1)



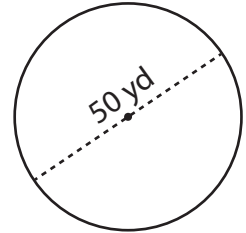
Circumference = 34.5 in

2)



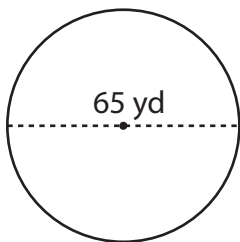
Circumference = 25.1 ft

3)



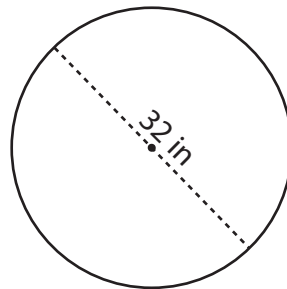
Circumference = 157 yd

4)



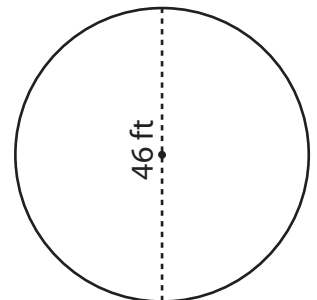
Circumference = 204.1 yd

5)



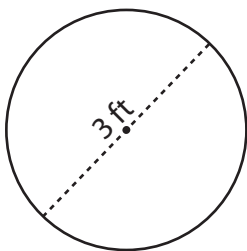
Circumference = 100.5 in

6)



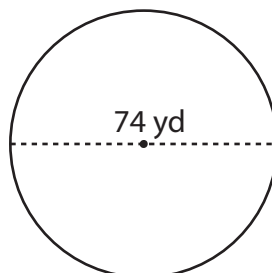
Circumference = 144.4 ft

7)



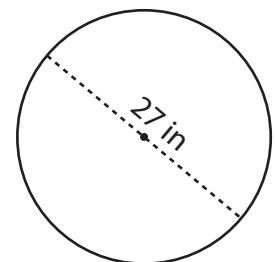
Circumference = 9.4 ft

8)



Circumference = 232.4 yd

9)



Circumference = 84.8 in