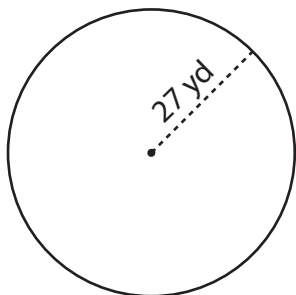


Circumference of a Circle

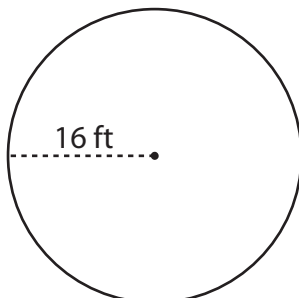
Find the circumference of each circle. Round your answer to the nearest tenth. (use $\pi = 3.14$)

1)



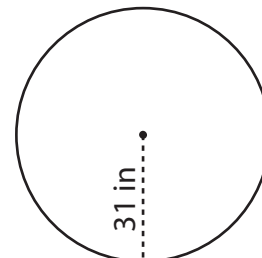
Circumference = _____

2)



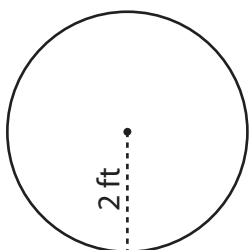
Circumference = _____

3)



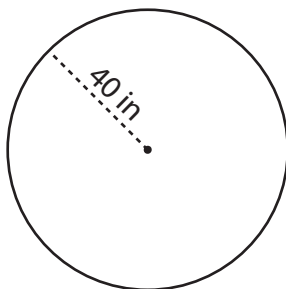
Circumference = _____

4)



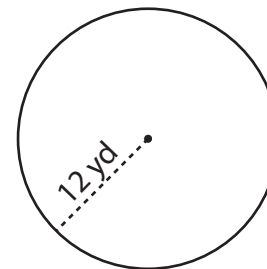
Circumference = _____

5)



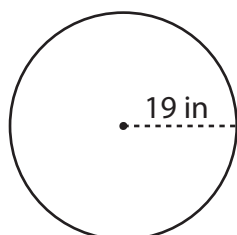
Circumference = _____

6)



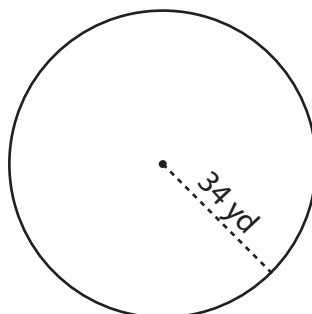
Circumference = _____

7)



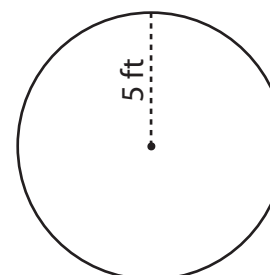
Circumference = _____

8)



Circumference = _____

9)



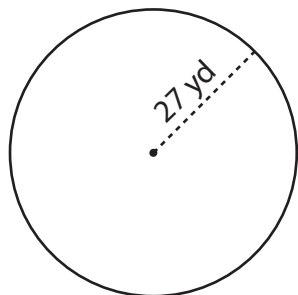
Circumference = _____

Circumference of a Circle

Answer Key

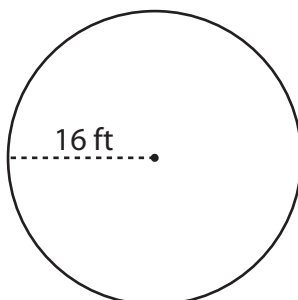
Find the circumference of each circle. Round your answer to the nearest tenth. (use $\pi = 3.14$)

1)



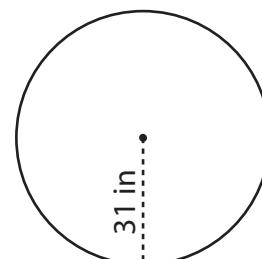
Circumference = 169.6 yd

2)



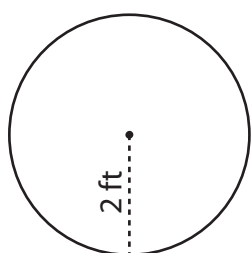
Circumference = 100.5 ft

3)



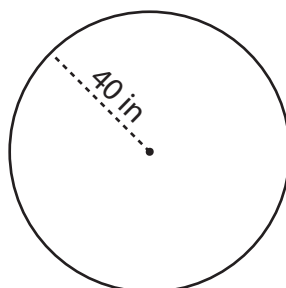
Circumference = 194.7 in

4)



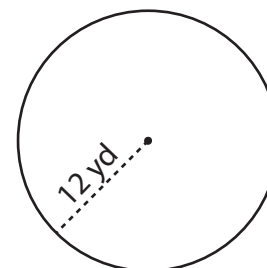
Circumference = 12.6 ft

5)



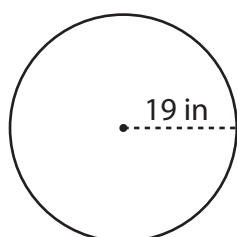
Circumference = 251.2 in

6)



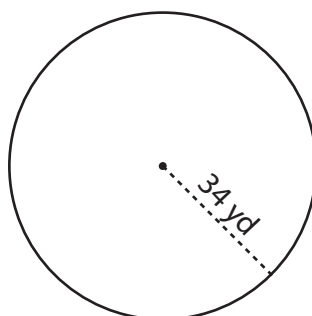
Circumference = 75.4 yd

7)



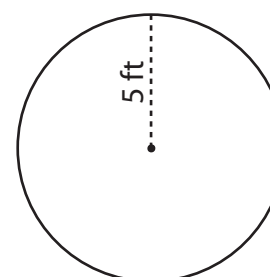
Circumference = 119.3 in

8)



Circumference = 213.5 yd

9)



Circumference = 31.4 ft