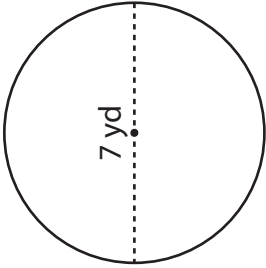


Circumference of a Circle

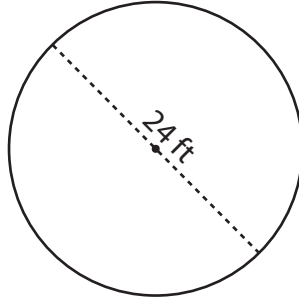
Find the circumference of each circle in terms of π .

1)



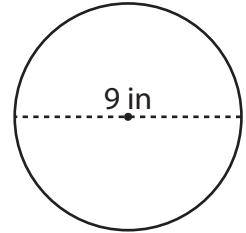
Circumference = _____

2)



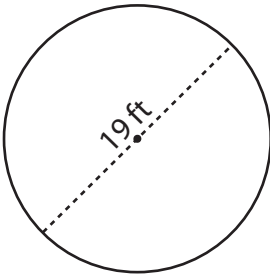
Circumference = _____

3)



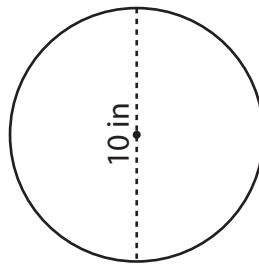
Circumference = _____

4)



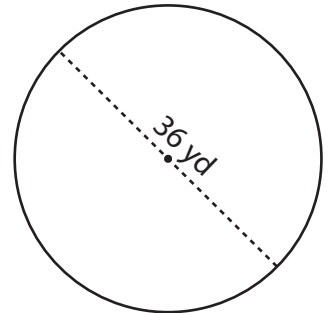
Circumference = _____

5)



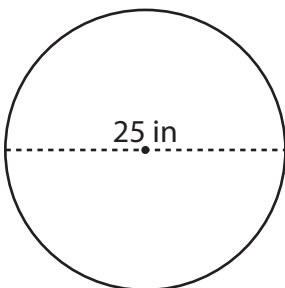
Circumference = _____

6)



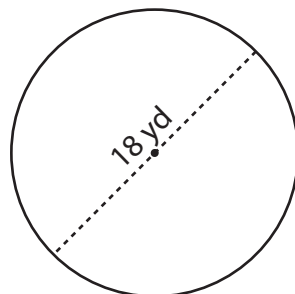
Circumference = _____

7)



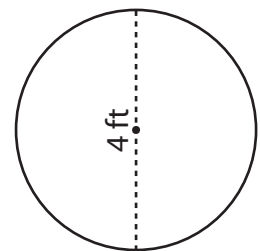
Circumference = _____

8)



Circumference = _____

9)



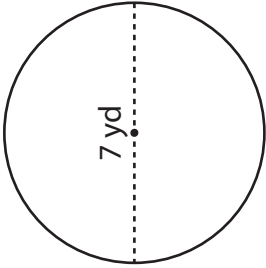
Circumference = _____

Circumference of a Circle

Answer Key

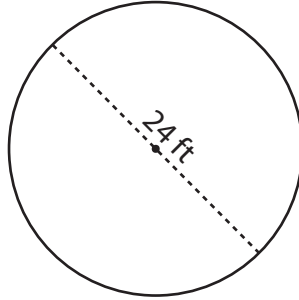
Find the circumference of each circle in terms of π .

1)



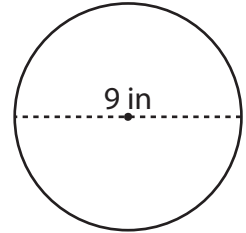
Circumference = 7π yd

2)



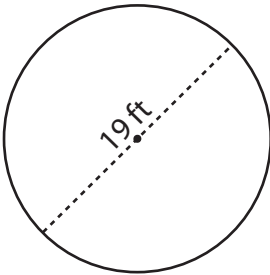
Circumference = 24π ft

3)



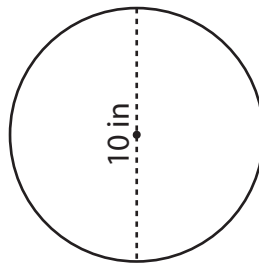
Circumference = 9π in

4)



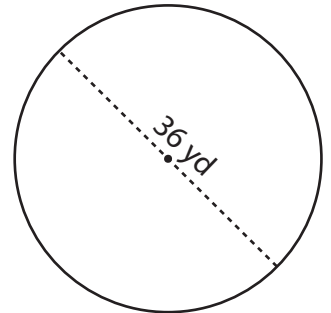
Circumference = 19π ft

5)



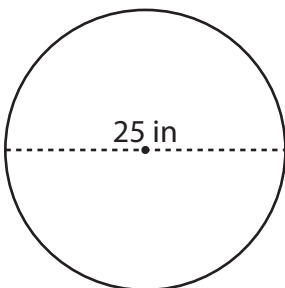
Circumference = 10π in

6)



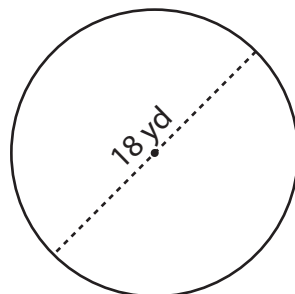
Circumference = 36π yd

7)



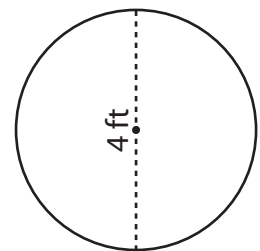
Circumference = 25π in

8)



Circumference = 18π yd

9)



Circumference = 4π ft