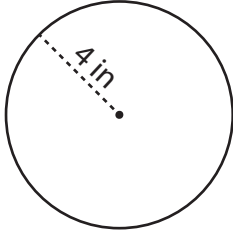


Circumference of a Circle

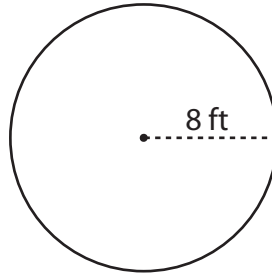
Find the circumference of each circle in terms of π .

1)



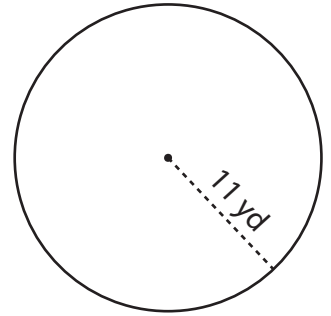
Circumference = _____

2)



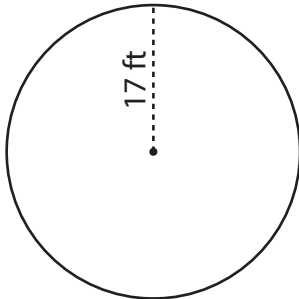
Circumference = _____

3)



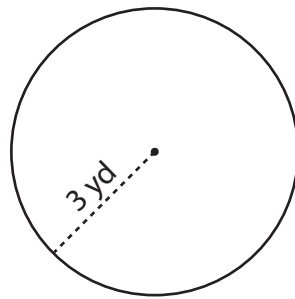
Circumference = _____

4)



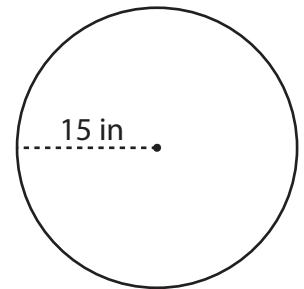
Circumference = _____

5)



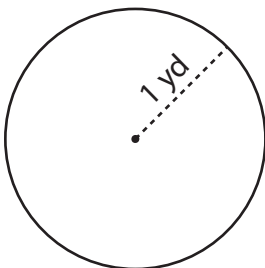
Circumference = _____

6)



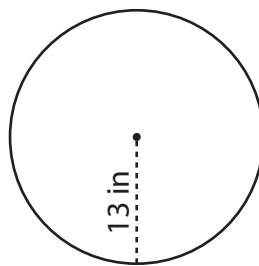
Circumference = _____

7)



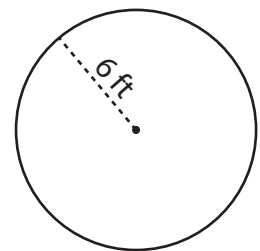
Circumference = _____

8)



Circumference = _____

9)



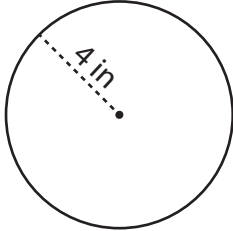
Circumference = _____

Circumference of a Circle

Answer Key

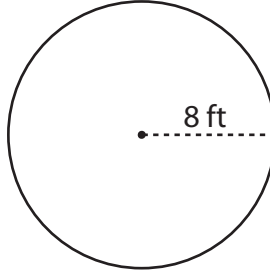
Find the circumference of each circle in terms of π .

1)



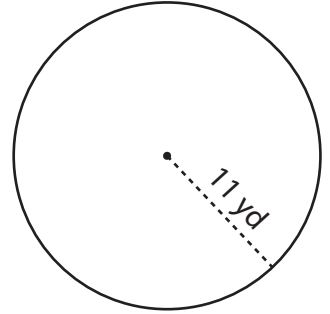
Circumference = 8π in

2)



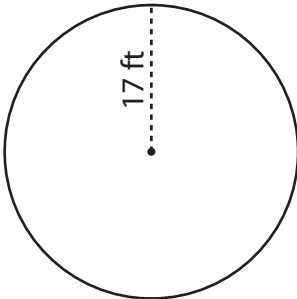
Circumference = 16π ft

3)



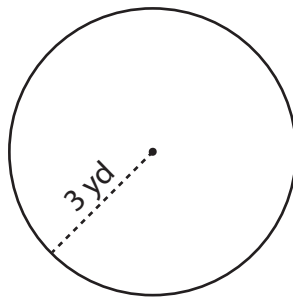
Circumference = 22π yd

4)



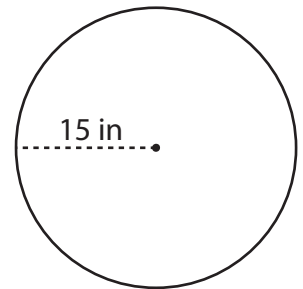
Circumference = 34π ft

5)



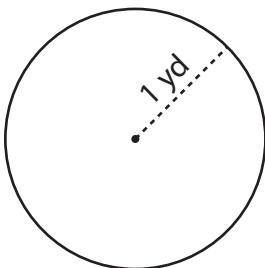
Circumference = 6π yd

6)



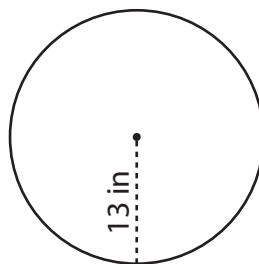
Circumference = 30π in

7)



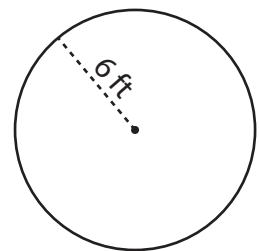
Circumference = 2π yd

8)



Circumference = 26π in

9)



Circumference = 12π ft