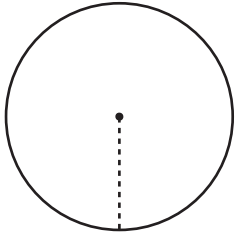


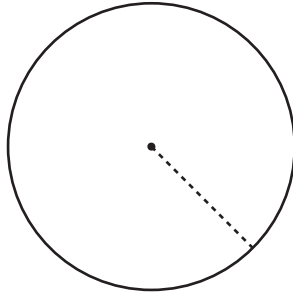
Finding the Radius Using the Circumference

Find the radius of each circle using the given circumference. Round your answer to the nearest tenth. (Use 3.14 for π .)

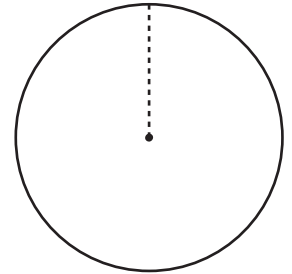
1) Circumference: 36.3 yd



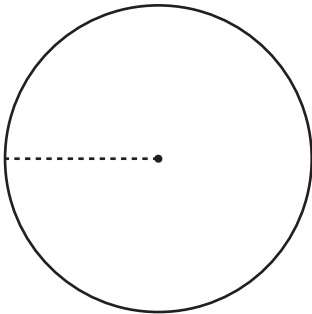
2) Circumference: 100 ft



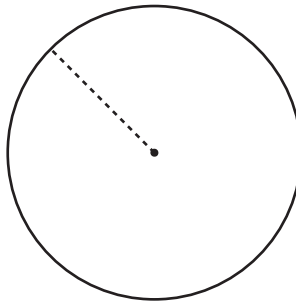
3) Circumference: 56.5 in



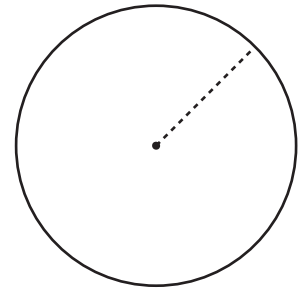
4) Circumference: 135 ft



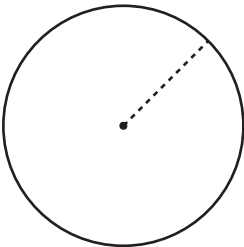
5) Circumference: 125.6 in



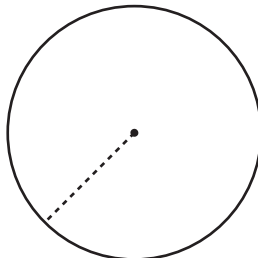
6) Circumference: 70 yd



7) Circumference: 46.7 in



8) Circumference: 64 yd



9) Circumference: 84.2 ft

