

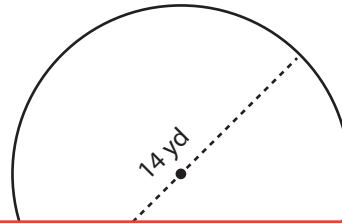
# Circumference of a Circle

Find the circumference of each circle. Round your answer to the nearest tenth. (Use 3.14 for  $\pi$ .)

1)



2)



3)



4)

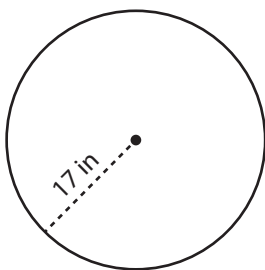
# Preview

Become a member to unlock  
unrestricted access to both printable  
and online worksheets.

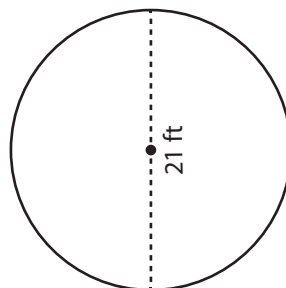


[www.tutoringhour.com](http://www.tutoringhour.com)

7)



8)



9)

