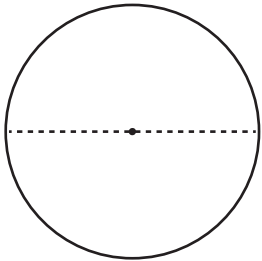


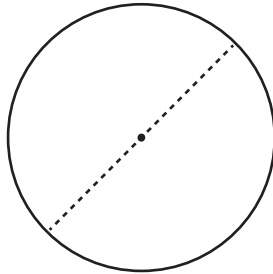
Finding the Diameter Using the Circumference

Find the diameter of each circle using the given circumference. Round your answer to the nearest tenth. (Use 3.14 for π .)

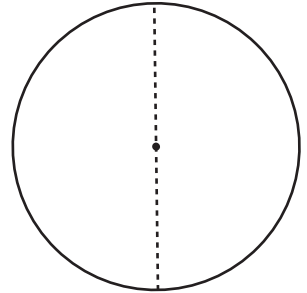
1) Circumference: 43.9 mm



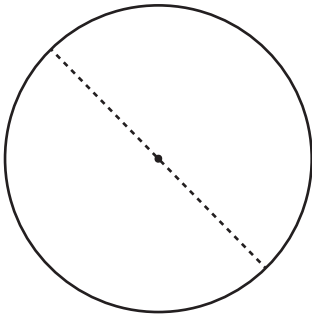
2) Circumference: 25 cm



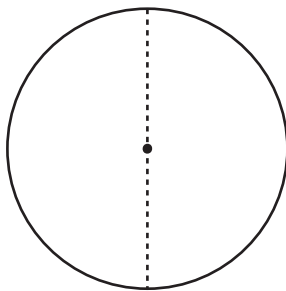
3) Circumference: 64.2 m



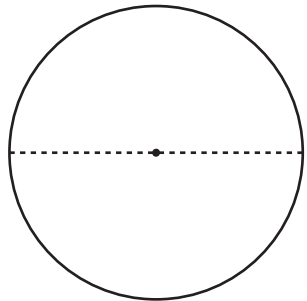
4) Circumference: 120 m



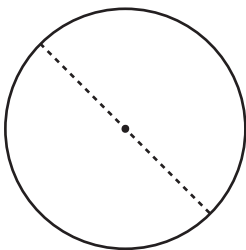
5) Circumference: 98.7 mm



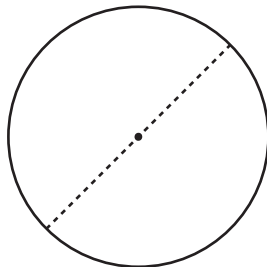
6) Circumference: 78.5 cm



7) Circumference: 12.6 cm



8) Circumference: 57 m



9) Circumference: 29.8 mm

