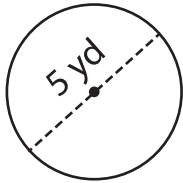


Circumference of a Circle

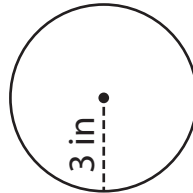
Find the circumference of each circle. (use $\pi = 3.14$)

1)




Circumference = _____

2)



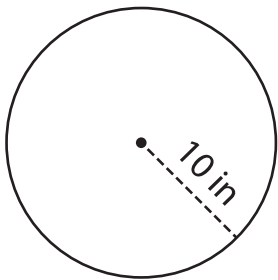
Circumference = _____

3)



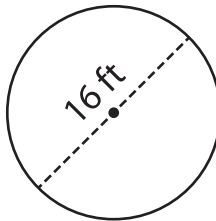
Circumference = _____

4)



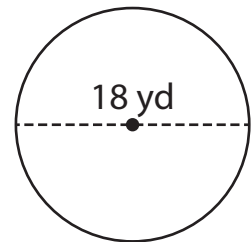
Circumference = _____

5)



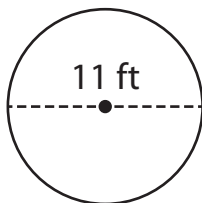
Circumference = _____

6)



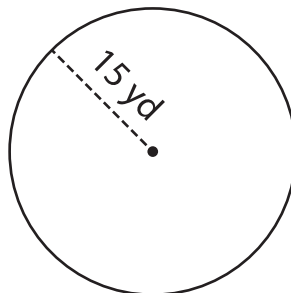
Circumference = _____

7)



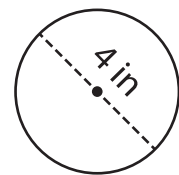
Circumference = _____

8)



Circumference = _____

9)



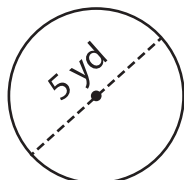
Circumference = _____

Circumference of a Circle

Answer key

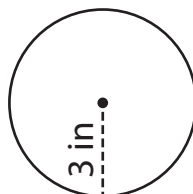
Find the circumference of each circle. (use $\pi = 3.14$)

1)



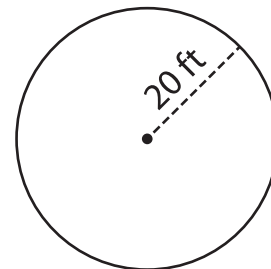
Circumference = 15.7 yd

2)



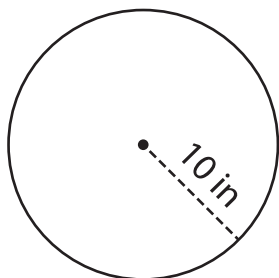
Circumference = 18.84 in

3)



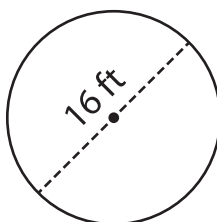
Circumference = 125.6 ft

4)



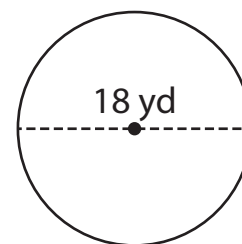
Circumference = 62.8 in

5)



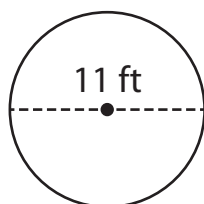
Circumference = 50.24 ft

6)



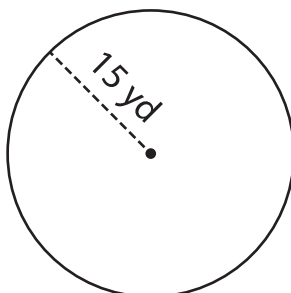
Circumference = 56.52 yd

7)



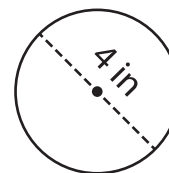
Circumference = 34.54 ft

8)



Circumference = 94.2 yd

9)



Circumference = 12.56 in