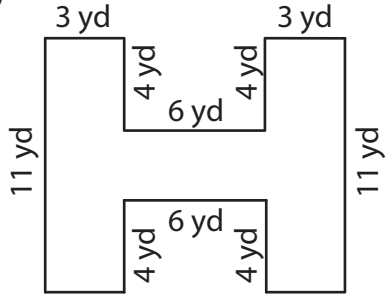


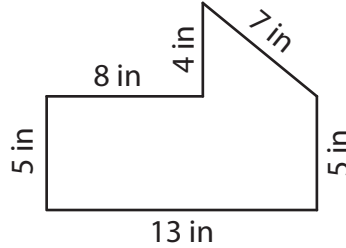
Perimeter of Compound Shapes

Find the perimeter of each shape.

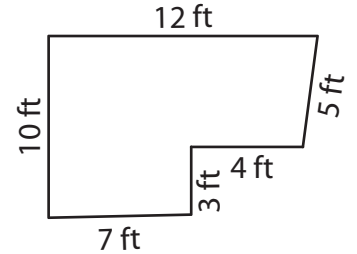
1)



2)



3)



Per

Preview

4)

Become a member to unlock
unrestricted access to both printable
and online worksheets.

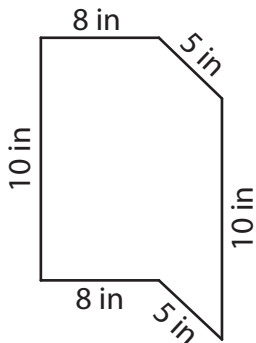
Per

www.tutoringhour.com

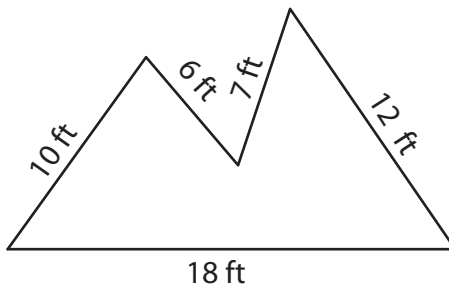


14 in

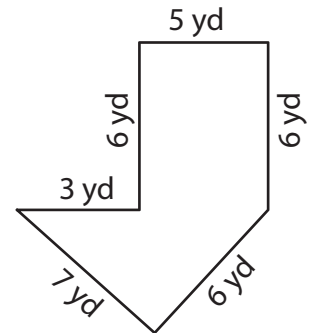
7)



8)



9)



Perimeter = _____

Perimeter = _____

Perimeter = _____