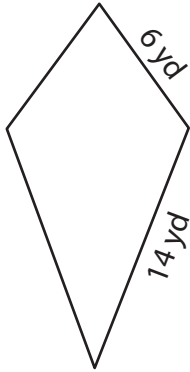


Perimeter of a Kite

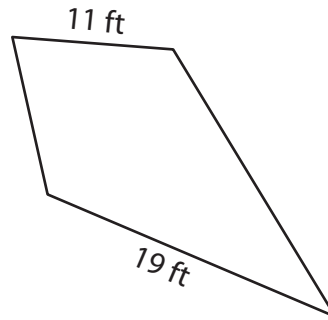
Find the perimeter of each kite.

1)



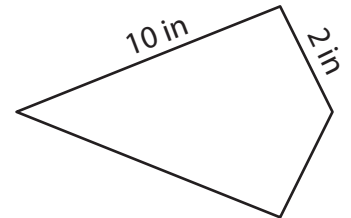
Perimeter = _____

2)



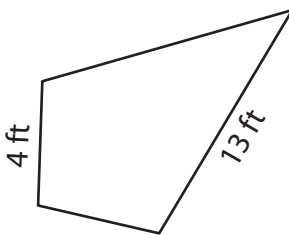
Perimeter = _____

3)



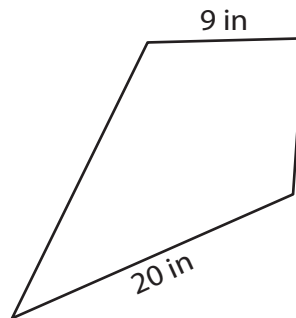
Perimeter = _____

4)



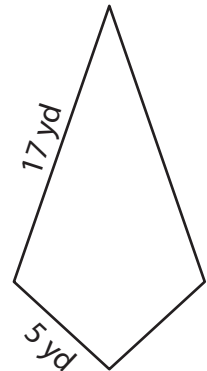
Perimeter = _____

5)



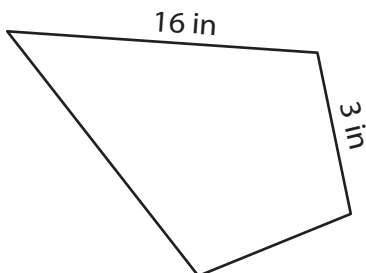
Perimeter = _____

6)



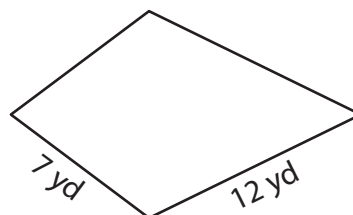
Perimeter = _____

7)



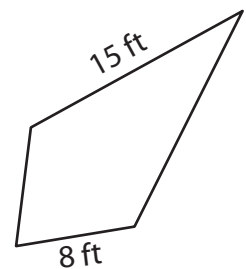
Perimeter = _____

8)



Perimeter = _____

9)



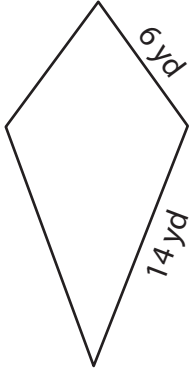
Perimeter = _____

Perimeter of a Kite

Answer key

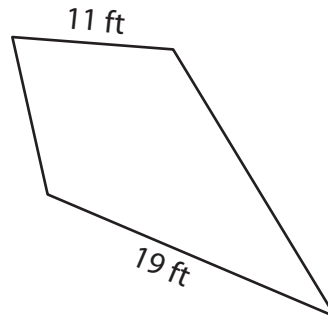
Find the perimeter of each kite.

1)



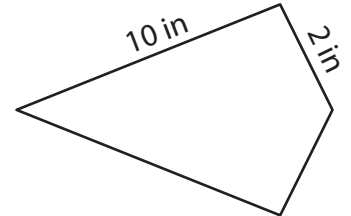
Perimeter = 40 yd

2)



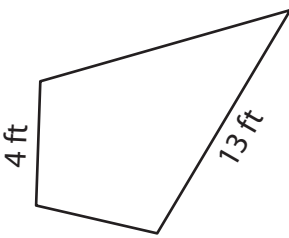
Perimeter = 60 ft

3)



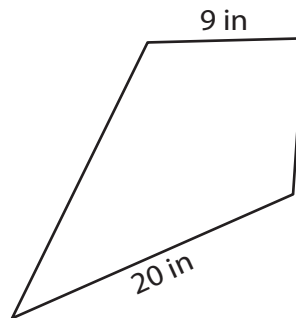
Perimeter = 24 in

4)



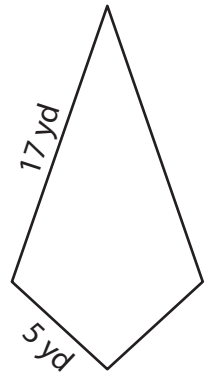
Perimeter = 34 ft

5)



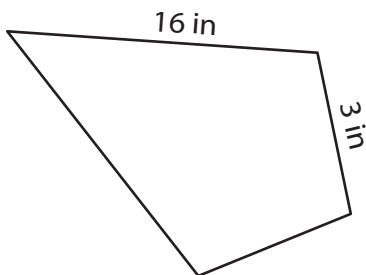
Perimeter = 58 in

6)



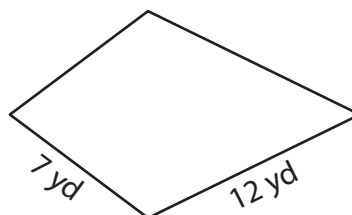
Perimeter = 44 yd

7)



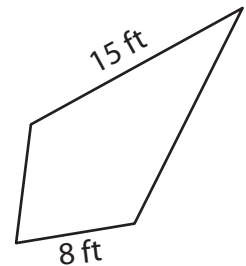
Perimeter = 38 in

8)



Perimeter = 38 yd

9)



Perimeter = 46 ft