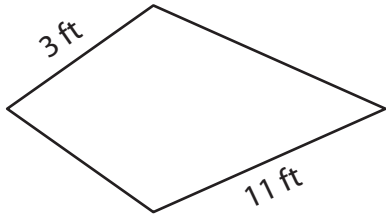


Perimeter of a Kite

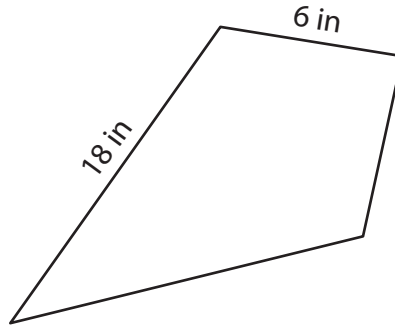
Find the perimeter of each kite.

1)



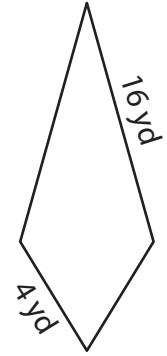
Perimeter = _____

2)



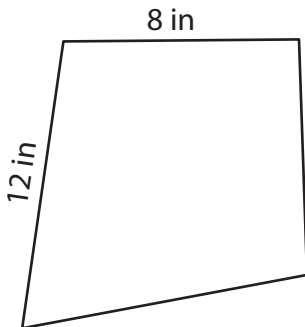
Perimeter = _____

3)



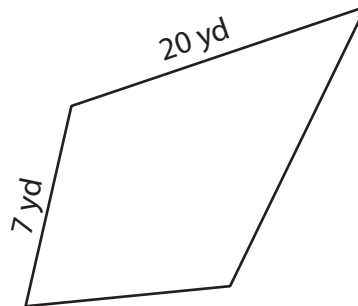
Perimeter = _____

4)



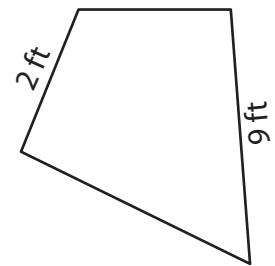
Perimeter = _____

5)



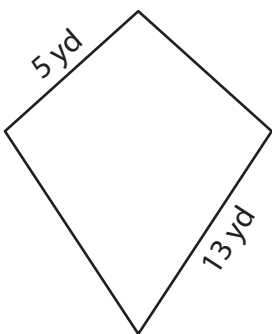
Perimeter = _____

6)



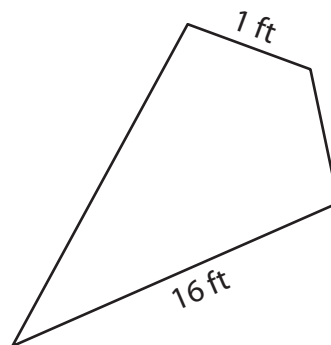
Perimeter = _____

7)



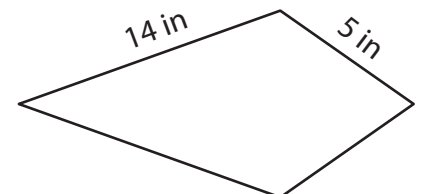
Perimeter = _____

8)



Perimeter = _____

9)



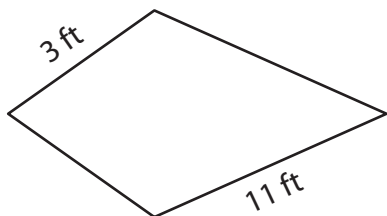
Perimeter = _____

Perimeter of a Kite

Answer key

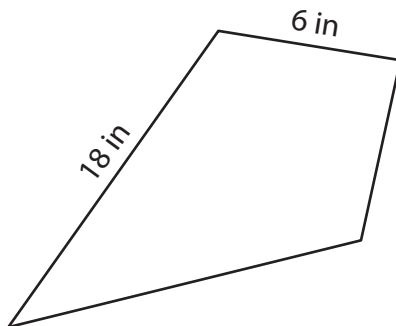
Find the perimeter of each kite.

1)



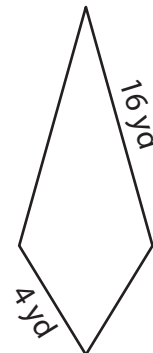
Perimeter = 28 ft

2)



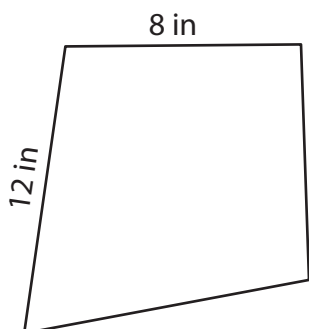
Perimeter = 48 in

3)



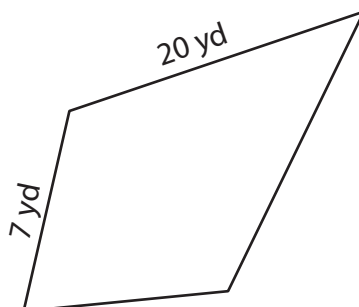
Perimeter = 40 yd

4)



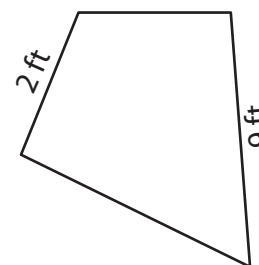
Perimeter = 40 in

5)



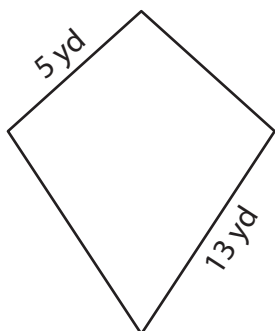
Perimeter = 54 yd

6)



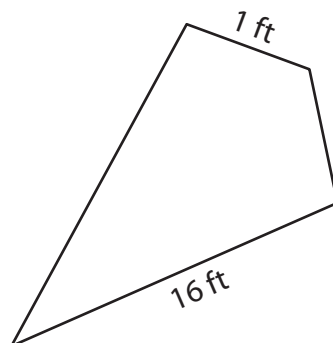
Perimeter = 22 ft

7)



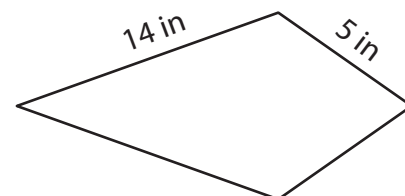
Perimeter = 36 yd

8)



Perimeter = 34 ft

9)



Perimeter = 38 in