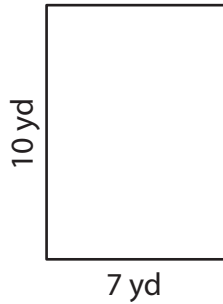


# Perimeter of a Rectangle

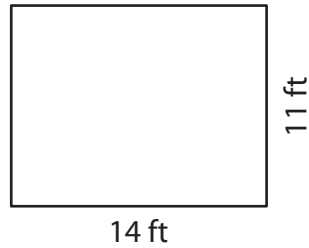
Find the perimeter of each rectangle.

1)



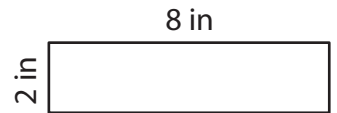
Perimeter = \_\_\_\_\_

2)



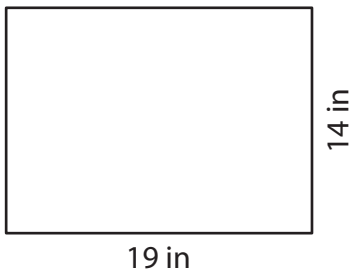
Perimeter = \_\_\_\_\_

3)



Perimeter = \_\_\_\_\_

4)



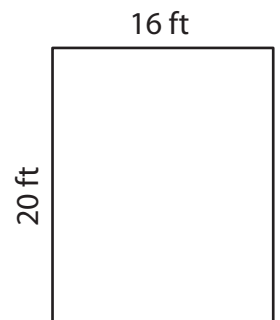
Perimeter = \_\_\_\_\_

5)



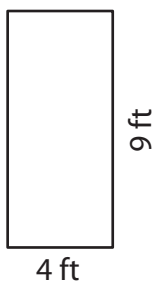
Perimeter = \_\_\_\_\_

6)



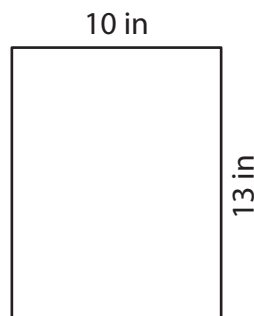
Perimeter = \_\_\_\_\_

7)



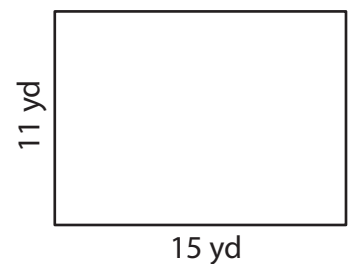
Perimeter = \_\_\_\_\_

8)



Perimeter = \_\_\_\_\_

9)



Perimeter = \_\_\_\_\_

# Perimeter of a Rectangle

Answer key

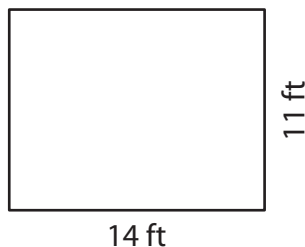
Find the perimeter of each rectangle.

1)



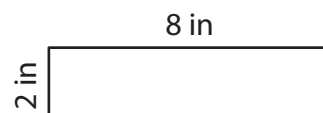
Perimeter = 34 yd

2)



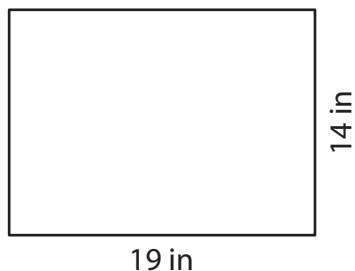
Perimeter = 50 ft

3)



Perimeter = 20 in

4)



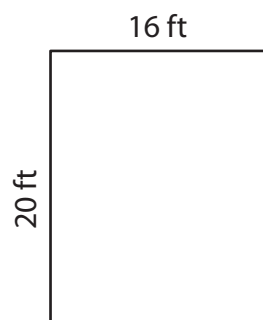
Perimeter = 66 in

5)



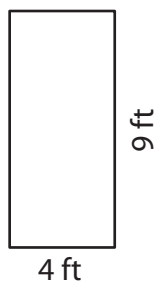
Perimeter = 12 yd

6)



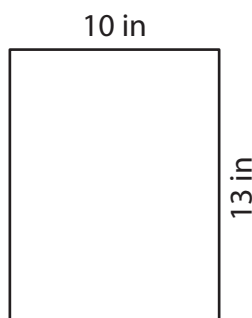
Perimeter = 72 ft

7)



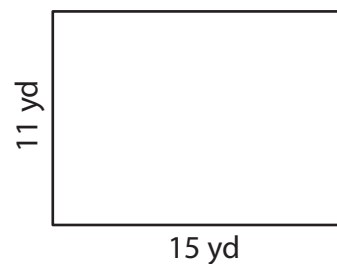
Perimeter = 26 ft

8)



Perimeter = 46 in

9)



Perimeter = 52 yd