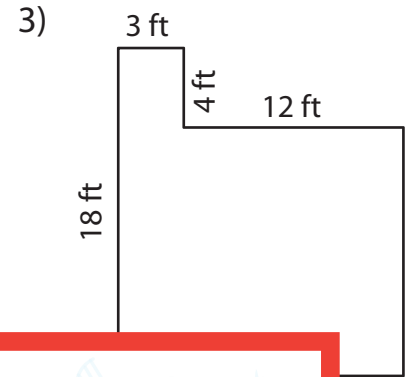
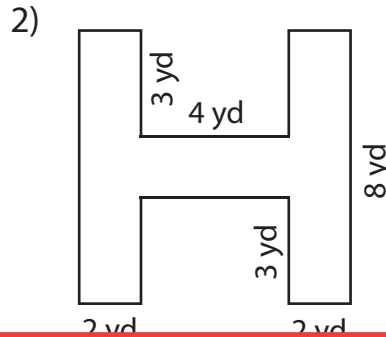
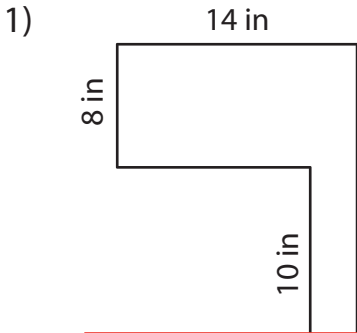


# Perimeter of Rectilinear Shapes

Find the perimeter of each shape.



Per

# Preview

4)



Per

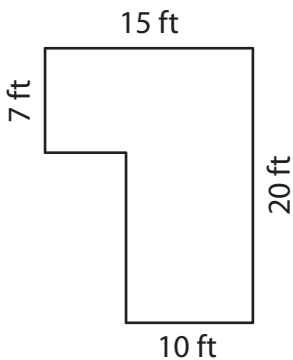
Become a member to unlock  
unrestricted access to both printable  
and online worksheets.



www.tutoringhour.com

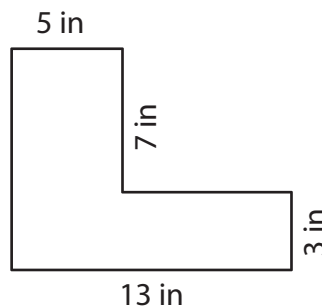
2 in

7)



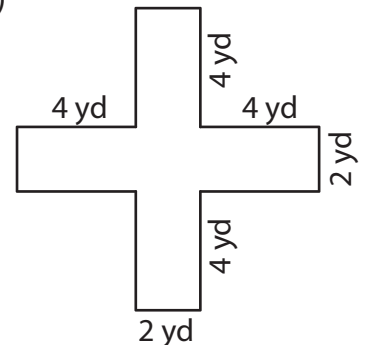
Perimeter = \_\_\_\_\_

8)



Perimeter = \_\_\_\_\_

9)



Perimeter = \_\_\_\_\_