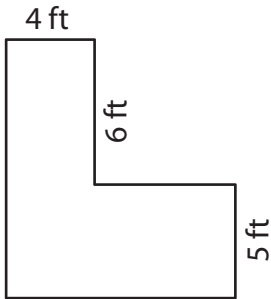


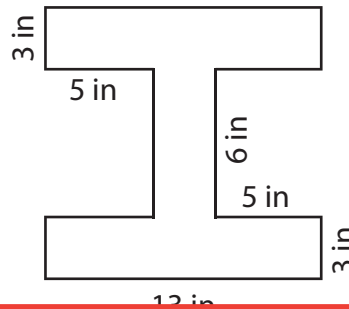
# Perimeter of Rectilinear Shapes

Find the perimeter of each shape.

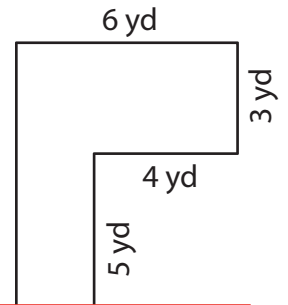
1)



2)



3)



Per

# Preview

4)

Become a member to unlock  
unrestricted access to both printable  
and online worksheets.

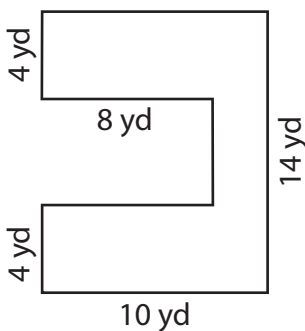
Per

5 ft

www.tutoringhour.com

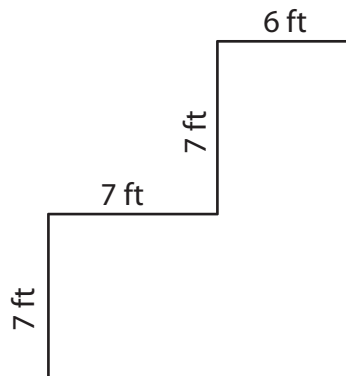


7)



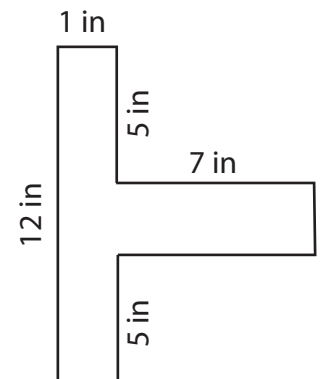
Perimeter = \_\_\_\_\_

8)



Perimeter = \_\_\_\_\_

9)



Perimeter = \_\_\_\_\_