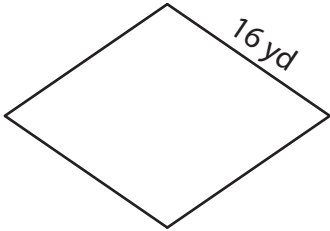


# Perimeter of a Rhombus

---

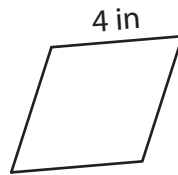
Find the perimeter of each rhombus.

1)




Perimeter = \_\_\_\_\_

2)



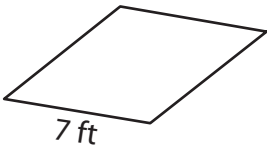
Perimeter = \_\_\_\_\_

3)



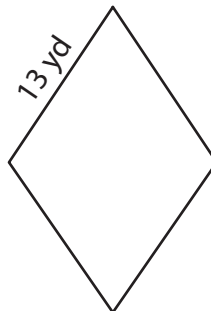
Perimeter = \_\_\_\_\_

4)



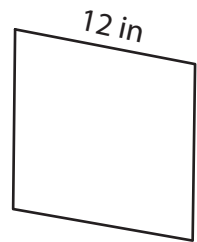
Perimeter = \_\_\_\_\_

5)



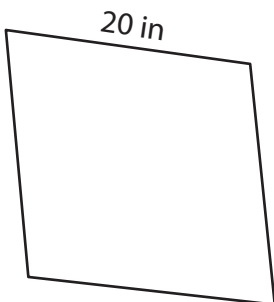
Perimeter = \_\_\_\_\_

6)



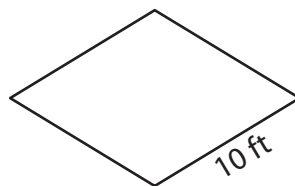
Perimeter = \_\_\_\_\_

7)



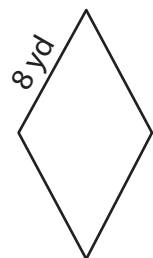
Perimeter = \_\_\_\_\_

8)



Perimeter = \_\_\_\_\_

9)



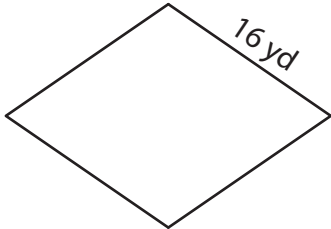
Perimeter = \_\_\_\_\_

# Perimeter of a Rhombus

Answer key

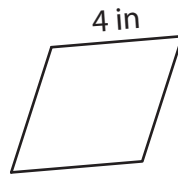
Find the perimeter of each rhombus.

1)




Perimeter = 64 yd

2)



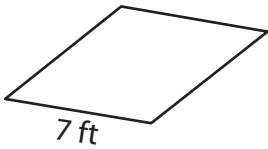
Perimeter = 16 in

3)



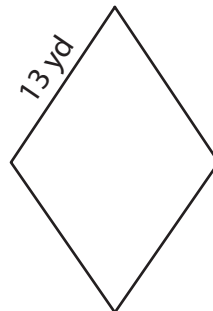
Perimeter = 76 ft

4)



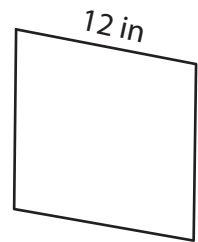
Perimeter = 28 ft

5)



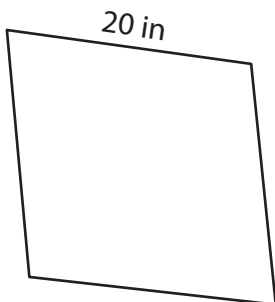
Perimeter = 52 yd

6)



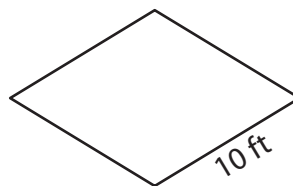
Perimeter = 48 in

7)



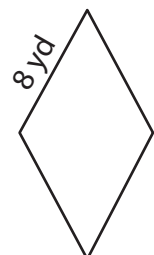
Perimeter = 80 in

8)



Perimeter = 40 ft

9)



Perimeter = 32 yd