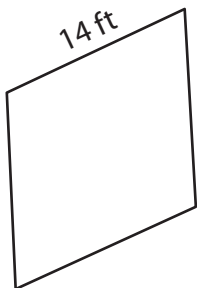


# Perimeter of a Rhombus

---

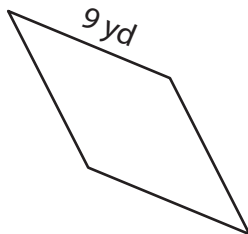
Find the perimeter of each rhombus.

1)



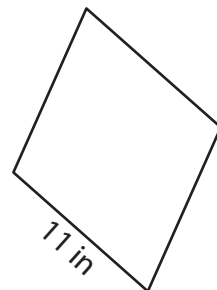
Perimeter = \_\_\_\_\_

2)



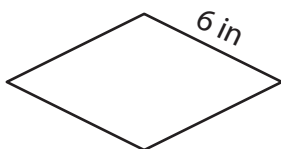
Perimeter = \_\_\_\_\_

3)



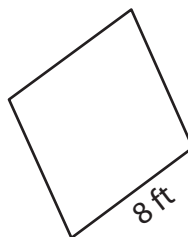
Perimeter = \_\_\_\_\_

4)



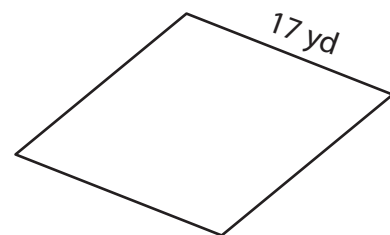
Perimeter = \_\_\_\_\_

5)



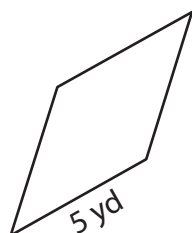
Perimeter = \_\_\_\_\_

6)



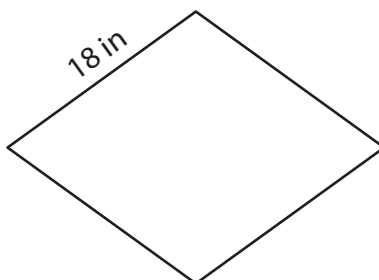
Perimeter = \_\_\_\_\_

7)




Perimeter = \_\_\_\_\_

8)



Perimeter = \_\_\_\_\_

9)



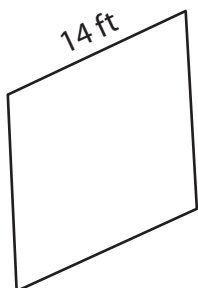
Perimeter = \_\_\_\_\_

# Perimeter of a Rhombus

Answer key

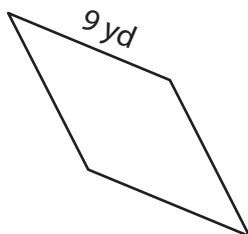
Find the perimeter of each rhombus.

1)



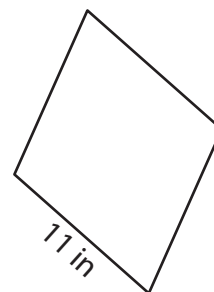
Perimeter = 56 ft

2)



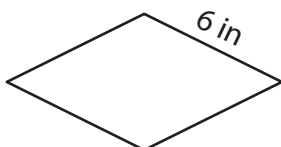
Perimeter = 36 yd

3)



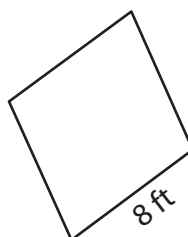
Perimeter = 44 in

4)



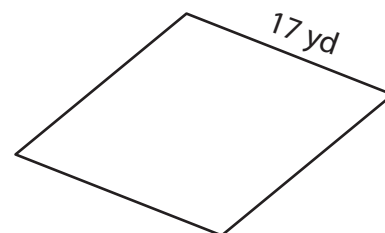
Perimeter = 24 in

5)



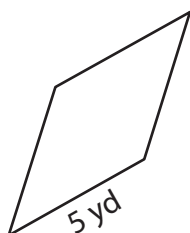
Perimeter = 32 ft

6)



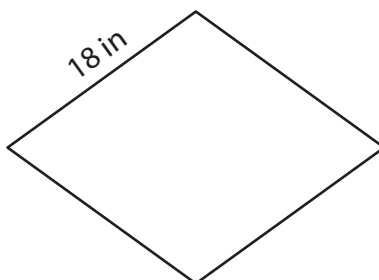
Perimeter = 68 yd

7)




Perimeter = 20 yd

8)



Perimeter = 72 in

9)



Perimeter = 60 ft