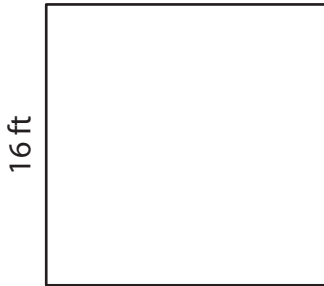


Perimeter of a Square

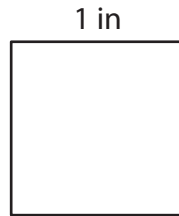
Find the perimeter of each square.

1)



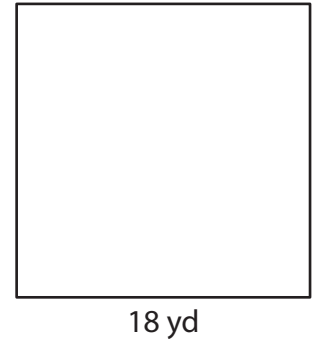
Perimeter = _____

2)



Perimeter = _____

3)




Perimeter = _____

4)



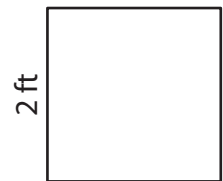
Perimeter = _____

5)




Perimeter = _____

6)



Perimeter = _____

7)



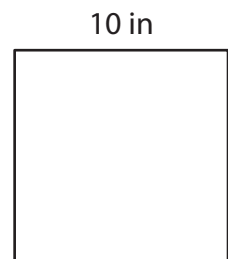
Perimeter = _____

8)



Perimeter = _____

9)



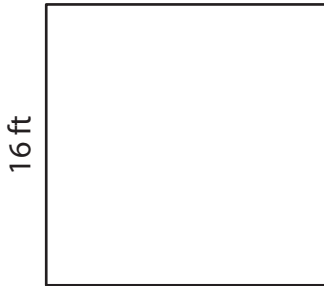
Perimeter = _____

Perimeter of a Square

Answer key

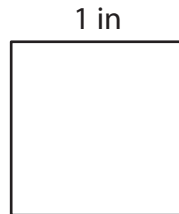
Find the perimeter of each square.

1)



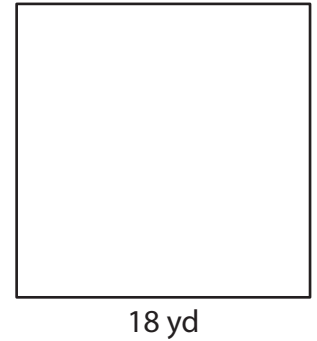
Perimeter = 64 ft

2)



Perimeter = 4 in

3)




Perimeter = 72 yd

4)



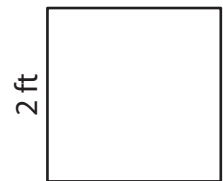
Perimeter = 12 in

5)




Perimeter = 52 yd

6)



Perimeter = 8 ft

7)



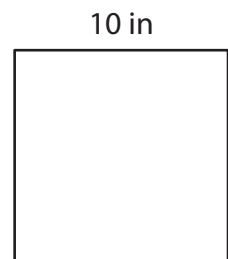
Perimeter = 60 yd

8)



Perimeter = 20 ft

9)



Perimeter = 40 in