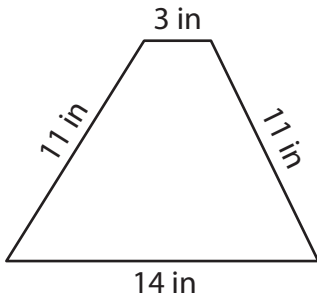


# Perimeter of a Trapezoid

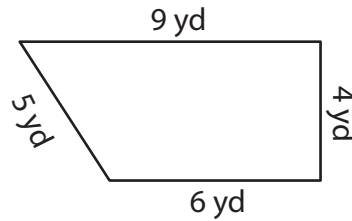
Find the perimeter of each trapezoid.

1)



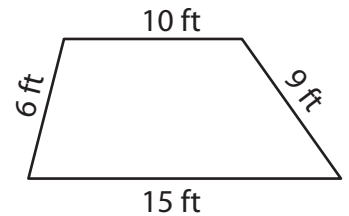
Perimeter = \_\_\_\_\_

2)



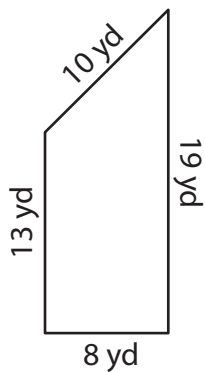
Perimeter = \_\_\_\_\_

3)



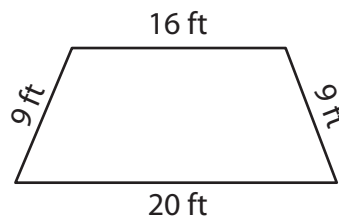
Perimeter = \_\_\_\_\_

4)



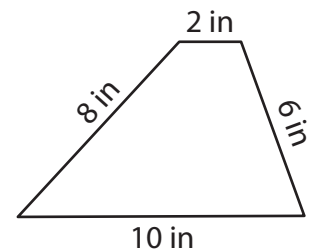
Perimeter = \_\_\_\_\_

5)



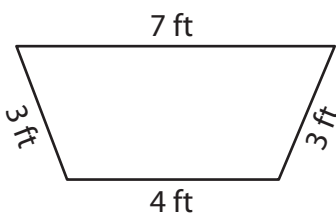
Perimeter = \_\_\_\_\_

6)



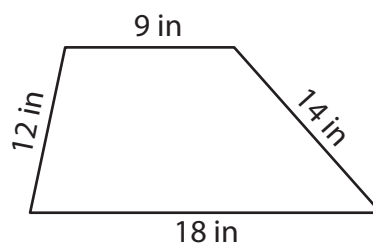
Perimeter = \_\_\_\_\_

7)



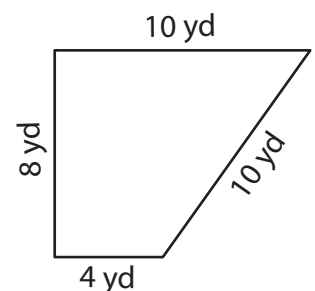
Perimeter = \_\_\_\_\_

8)



Perimeter = \_\_\_\_\_

9)



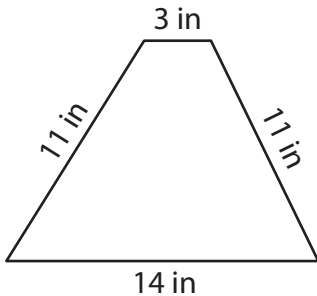
Perimeter = \_\_\_\_\_

# Perimeter of a Trapezoid

Answer key

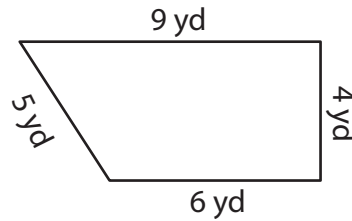
Find the perimeter of each trapezoid.

1)



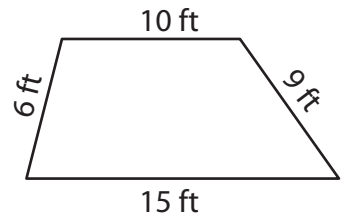
Perimeter = 39 in

2)



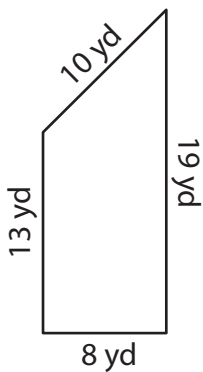
Perimeter = 24 yd

3)



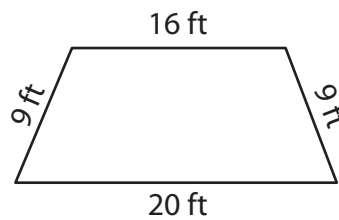
Perimeter = 40 ft

4)



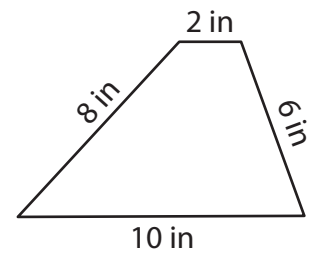
Perimeter = 50 yd

5)



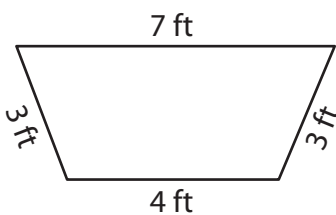
Perimeter = 54 ft

6)



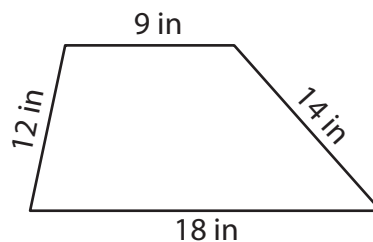
Perimeter = 26 in

7)



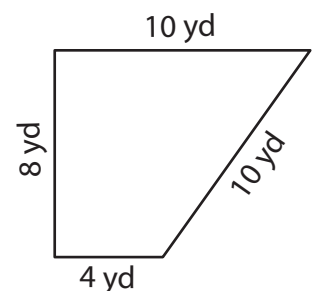
Perimeter = 17 ft

8)



Perimeter = 53 in

9)



Perimeter = 32 yd