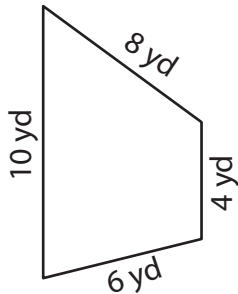


# Perimeter of a Trapezoid

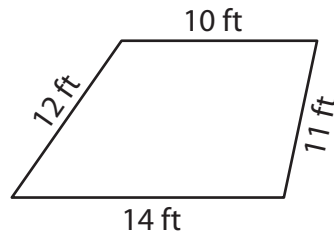
Find the perimeter of each trapezoid.

1)



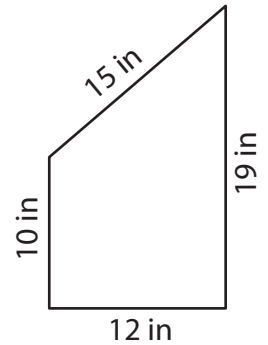
Perimeter = \_\_\_\_\_

2)



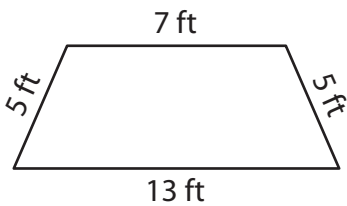
Perimeter = \_\_\_\_\_

3)



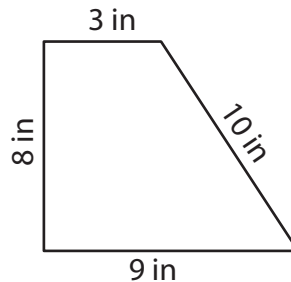
Perimeter = \_\_\_\_\_

4)



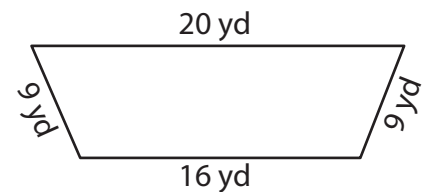
Perimeter = \_\_\_\_\_

5)



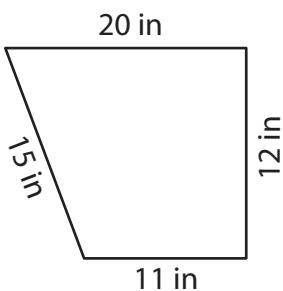
Perimeter = \_\_\_\_\_

6)



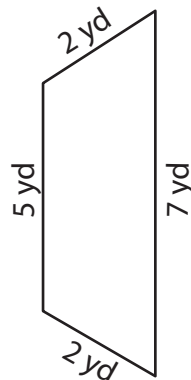
Perimeter = \_\_\_\_\_

7)



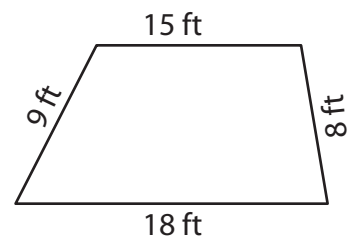
Perimeter = \_\_\_\_\_

8)



Perimeter = \_\_\_\_\_

9)



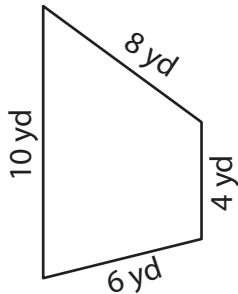
Perimeter = \_\_\_\_\_

# Perimeter of a Trapezoid

Answer key

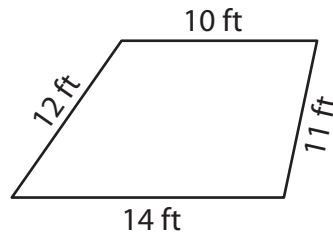
Find the perimeter of each trapezoid.

1)



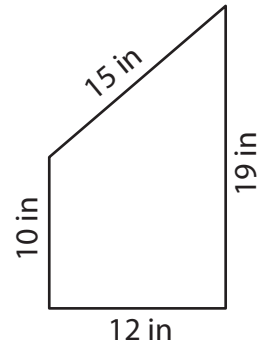
Perimeter = 28 yd

2)



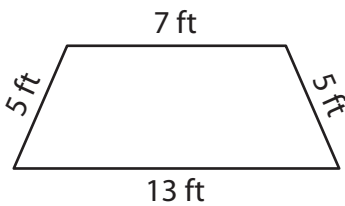
Perimeter = 47 ft

3)



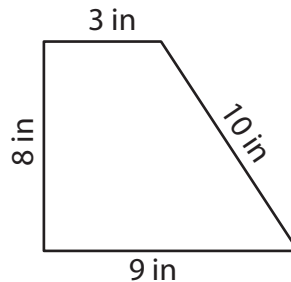
Perimeter = 56 in

4)



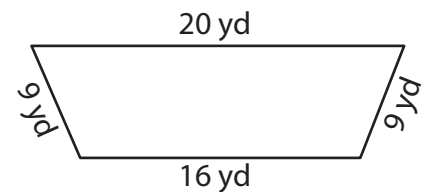
Perimeter = 30 ft

5)



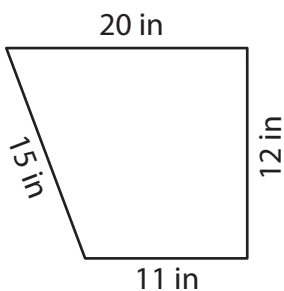
Perimeter = 30 in

6)



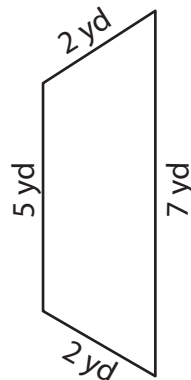
Perimeter = 54 yd

7)



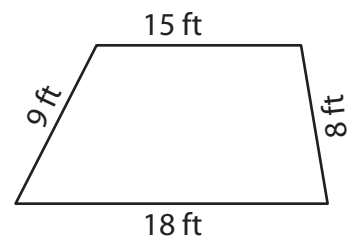
Perimeter = 58 in

8)



Perimeter = 16 yd

9)



Perimeter = 50 ft