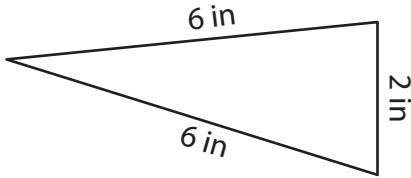


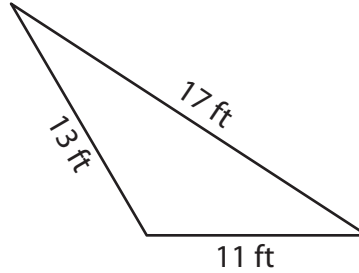
Perimeter of a Triangle

Find the perimeter of each triangle.

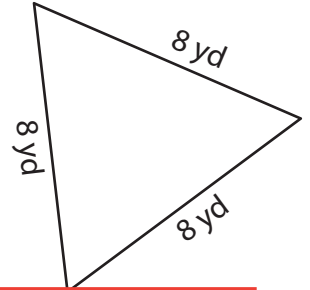
1)



2)



3)



Per

Preview

4)

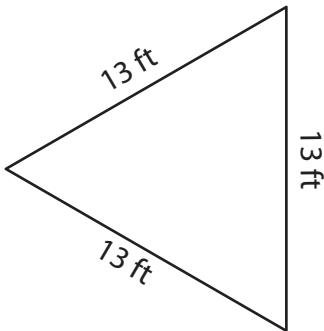
Become a member to unlock
unrestricted access to both printable
and online worksheets.

Per



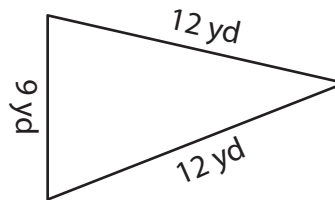
www.tutoringhour.com

7)



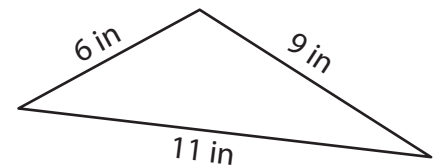
Perimeter = _____

8)



Perimeter = _____

9)



Perimeter = _____