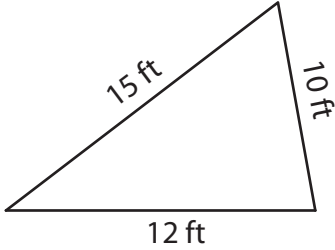


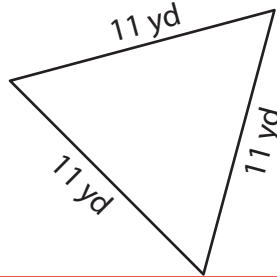
Perimeter of a Triangle

Find the perimeter of each triangle.

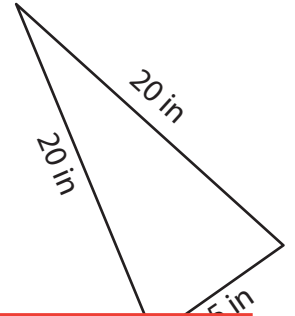
1)



2)



3)



Per

Preview

4)

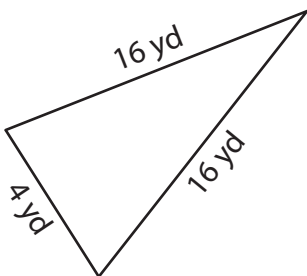
Become a member to unlock
unrestricted access to both printable
and online worksheets.



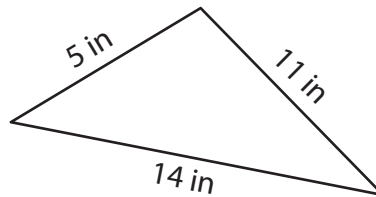
Per

www.tutoringhour.com

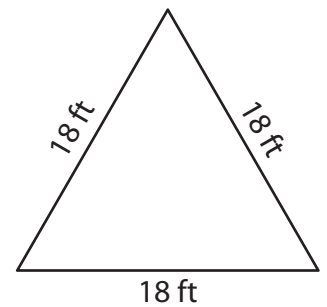
7)



8)



9)



Perimeter = _____

Perimeter = _____

Perimeter = _____