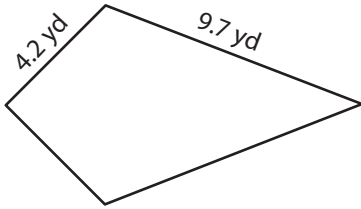


# Perimeter of a Kite

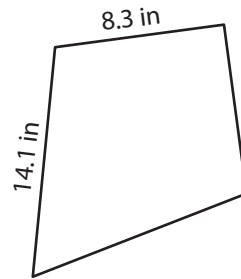
Find the perimeter of each kite.

1)



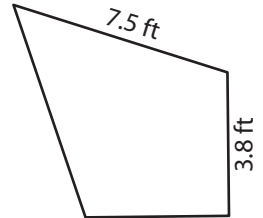
Perimeter = \_\_\_\_\_

2)



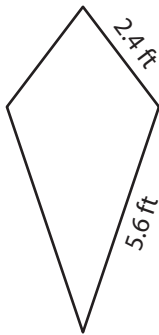
Perimeter = \_\_\_\_\_

3)



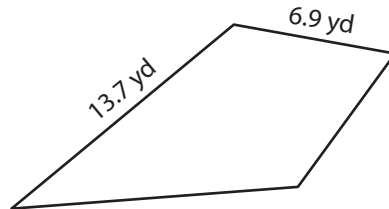
Perimeter = \_\_\_\_\_

4)



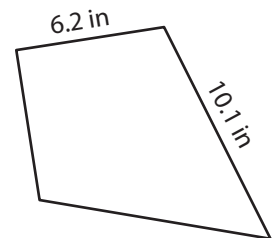
Perimeter = \_\_\_\_\_

5)



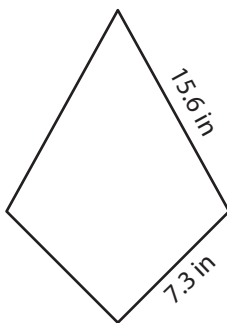
Perimeter = \_\_\_\_\_

6)



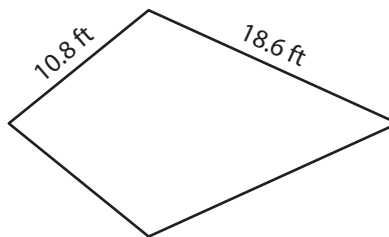
Perimeter = \_\_\_\_\_

7)



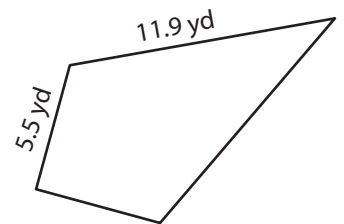
Perimeter = \_\_\_\_\_

8)



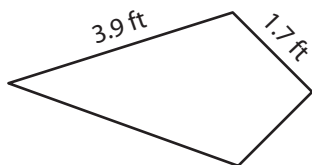
Perimeter = \_\_\_\_\_

9)



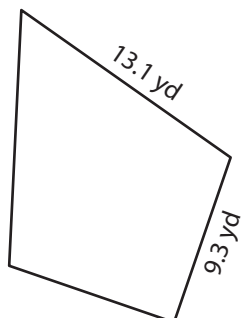
Perimeter = \_\_\_\_\_

10)



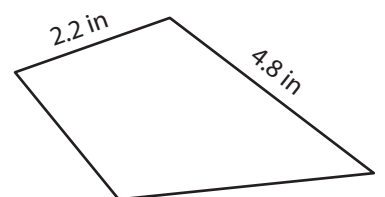
Perimeter = \_\_\_\_\_

11)



Perimeter = \_\_\_\_\_

12)



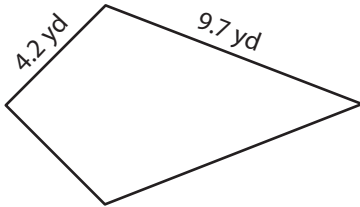
Perimeter = \_\_\_\_\_

# Perimeter of a Kite

## Answer Key

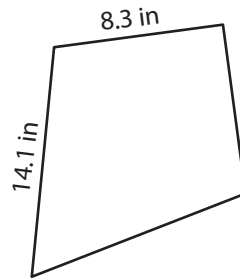
Find the perimeter of each kite.

1)



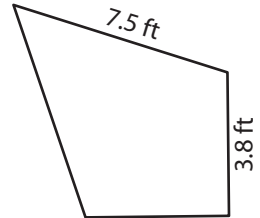
Perimeter = 27.8 yd

2)



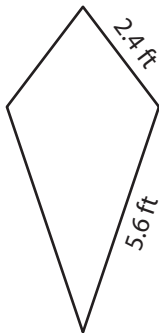
Perimeter = 44.8 in

3)



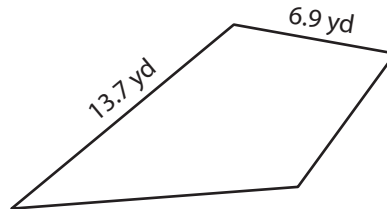
Perimeter = 22.6 ft

4)



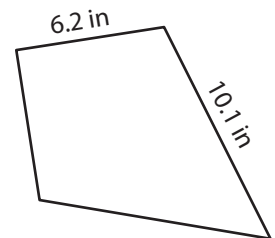
Perimeter = 16 ft

5)



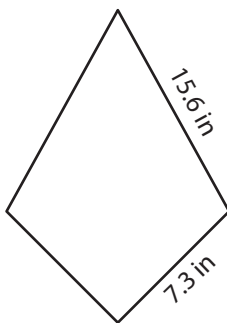
Perimeter = 41.2 yd

6)



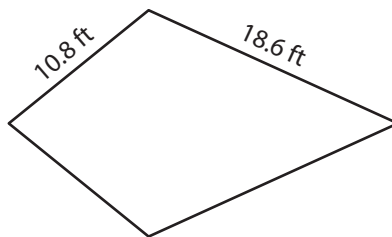
Perimeter = 32.6 in

7)



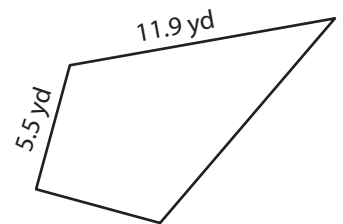
Perimeter = 45.8 in

8)



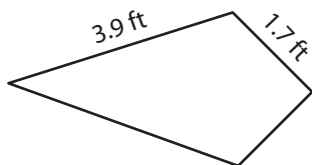
Perimeter = 58.8 ft

9)



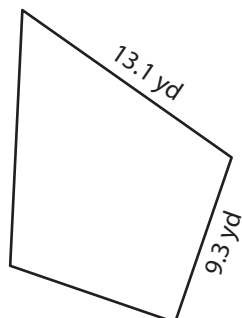
Perimeter = 34.8 yd

10)



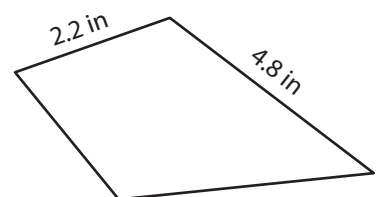
Perimeter = 11.2 ft

11)



Perimeter = 44.8 yd

12)



Perimeter = 14 in