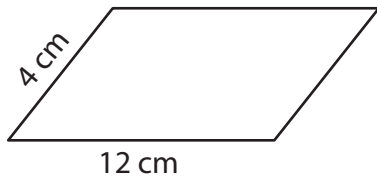


# Perimeter of a Parallelogram

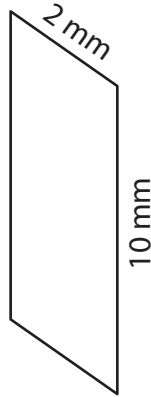
Find the perimeter of each parallelogram.

1)



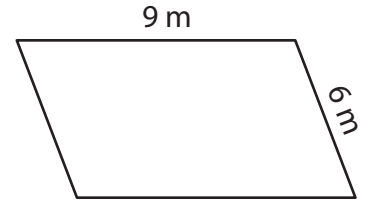
Perimeter = \_\_\_\_\_

2)



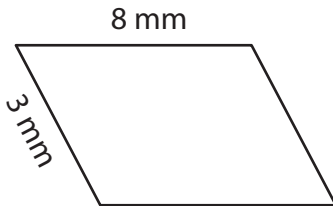
Perimeter = \_\_\_\_\_

3)



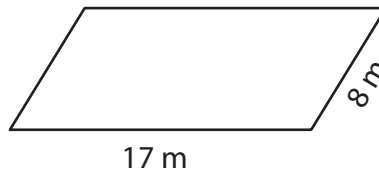
Perimeter = \_\_\_\_\_

4)



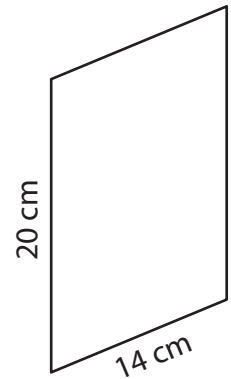
Perimeter = \_\_\_\_\_

5)



Perimeter = \_\_\_\_\_

6)



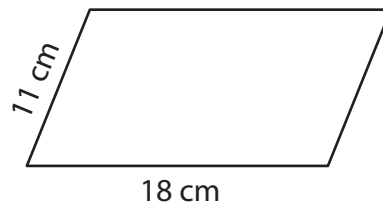
Perimeter = \_\_\_\_\_

7)



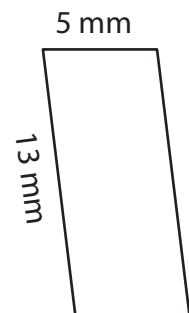
Perimeter = \_\_\_\_\_

8)



Perimeter = \_\_\_\_\_

9)



Perimeter = \_\_\_\_\_