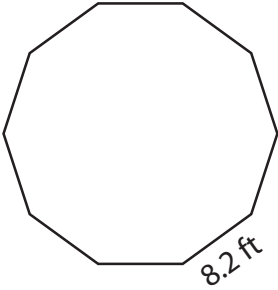


Perimeter of a Polygon

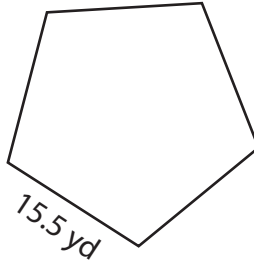
Find the perimeter of each regular polygon.

1)



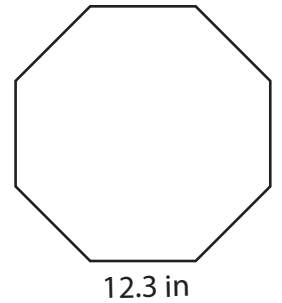
Perimeter = _____

2)



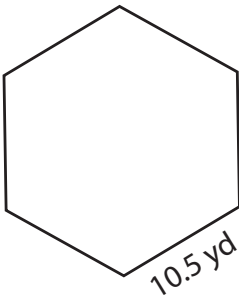
Perimeter = _____

3)



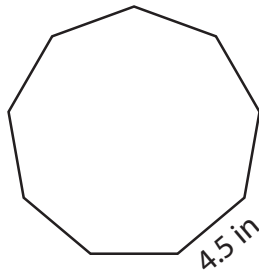
Perimeter = _____

4)



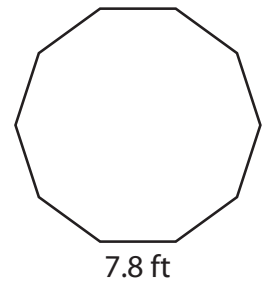
Perimeter = _____

5)



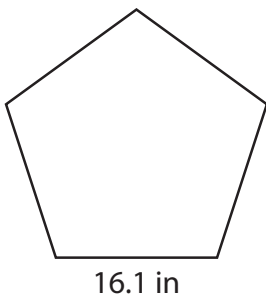
Perimeter = _____

6)



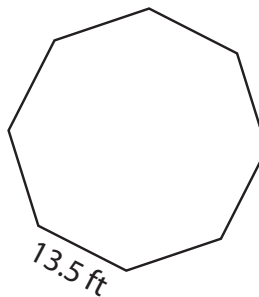
Perimeter = _____

7)



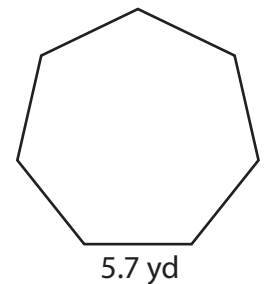
Perimeter = _____

8)



Perimeter = _____

9)



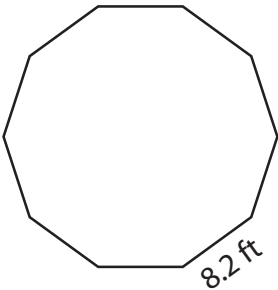
Perimeter = _____

Perimeter of a Polygon

Answer Key

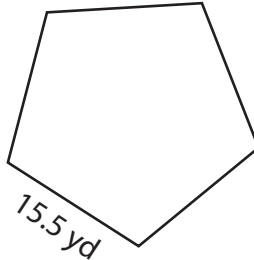
Find the perimeter of each regular polygon.

1)



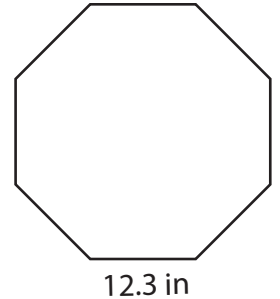
Perimeter = 82 ft

2)



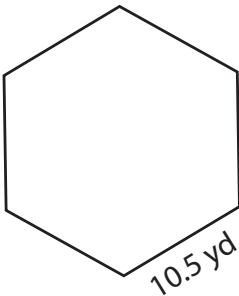
Perimeter = 77.5 yd

3)



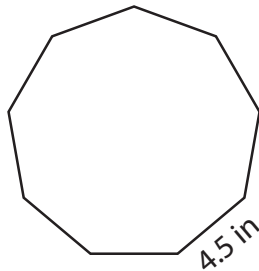
Perimeter = 98.4 in

4)



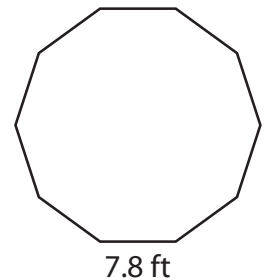
Perimeter = 63 yd

5)



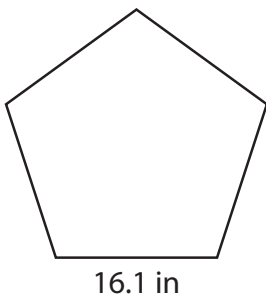
Perimeter = 40.5 in

6)



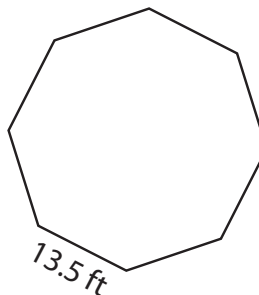
Perimeter = 78 ft

7)



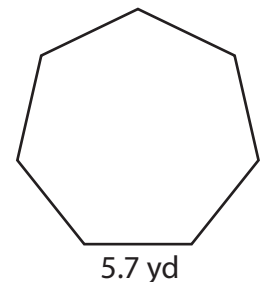
Perimeter = 80.5 in

8)



Perimeter = 108 ft

9)



Perimeter = 39.9 yd