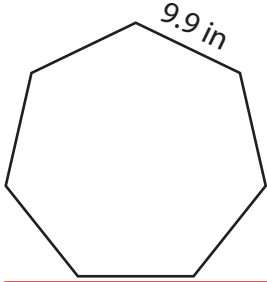


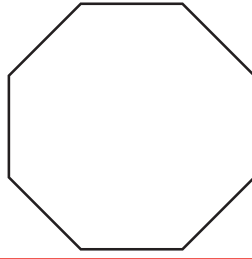
# Perimeter of a Polygon

Find the perimeter of each regular polygon.

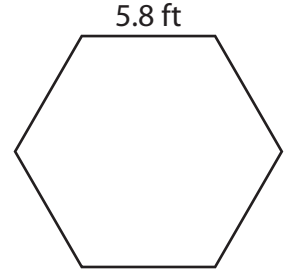
1)



2)



3)



Peri

# Preview

4)

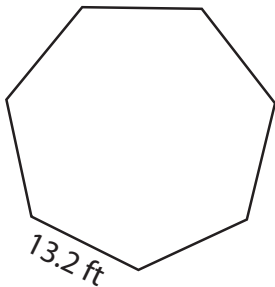
Become a member to unlock  
unrestricted access to both printable  
and online worksheets.



Peri

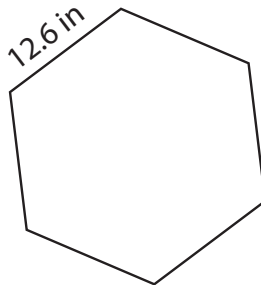
www.tutoringhour.com

7)



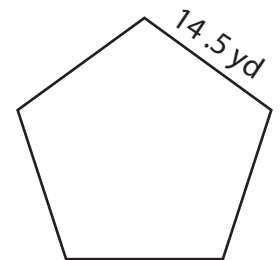
Perimeter = \_\_\_\_\_

8)



Perimeter = \_\_\_\_\_

9)



Perimeter = \_\_\_\_\_