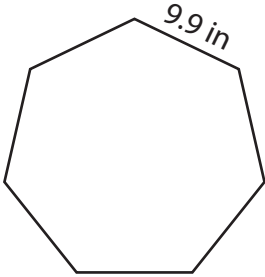


Perimeter of a Polygon

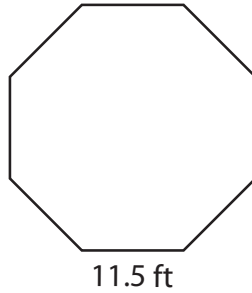
Find the perimeter of each regular polygon.

1)



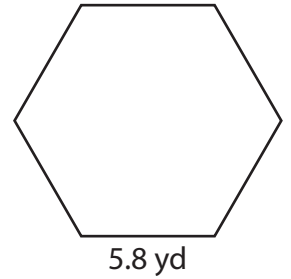
Perimeter = _____

2)



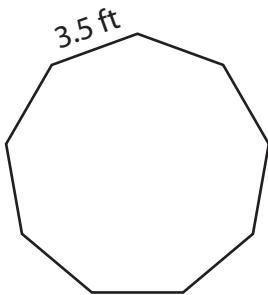
Perimeter = _____

3)



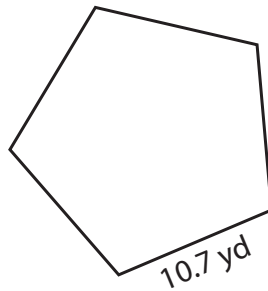
Perimeter = _____

4)



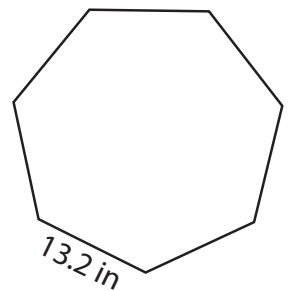
Perimeter = _____

5)



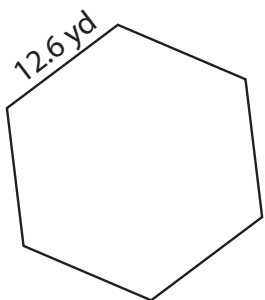
Perimeter = _____

6)



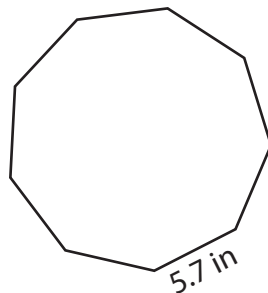
Perimeter = _____

7)



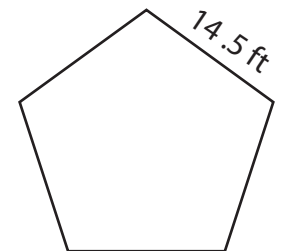
Perimeter = _____

8)



Perimeter = _____

9)



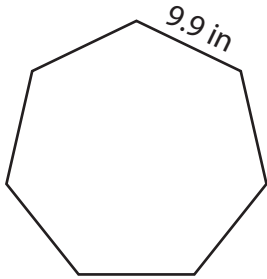
Perimeter = _____

Perimeter of a Polygon

Answer Key

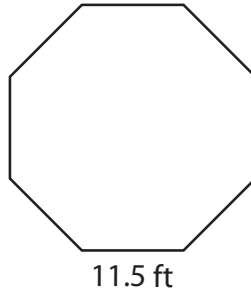
Find the perimeter of each regular polygon.

1)



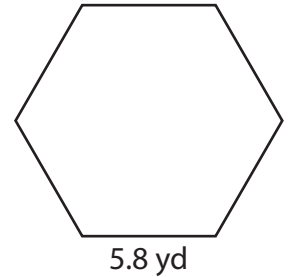
Perimeter = 69.3 in

2)



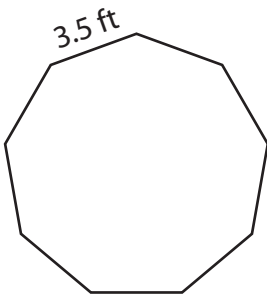
Perimeter = 92 ft

3)



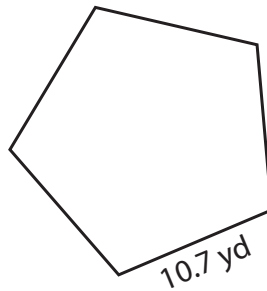
Perimeter = 34.8 yd

4)



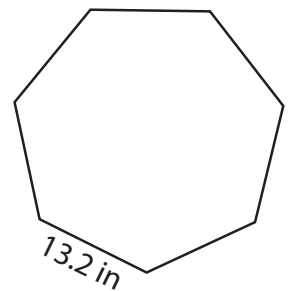
Perimeter = 31.5 ft

5)



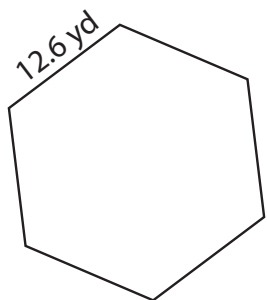
Perimeter = 53.5 yd

6)



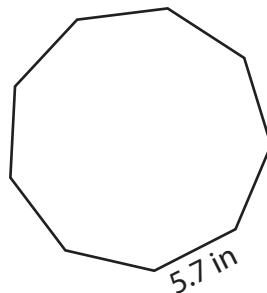
Perimeter = 92.4 in

7)



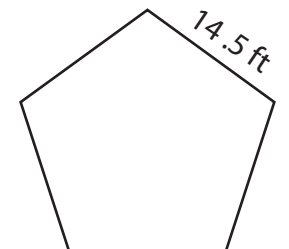
Perimeter = 75.6 yd

8)



Perimeter = 51.3 in

9)



Perimeter = 72.5 ft