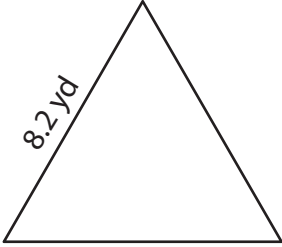


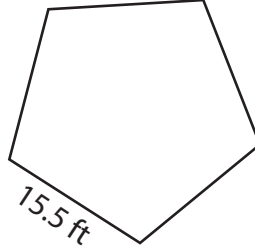
Perimeter of a Polygon

Find the perimeter of each regular polygon.

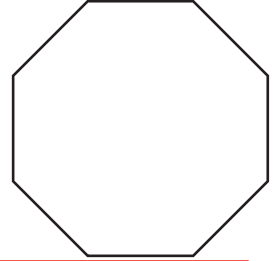
1)



2)



3)



Peri

Preview

4)

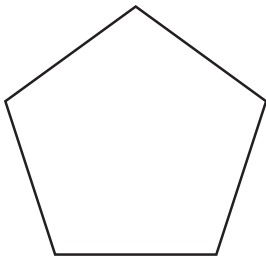
Become a member to unlock
unrestricted access to both printable
and online worksheets.

Peri



www.tutoringhour.com

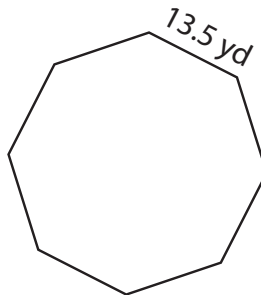
7)



16.1 in

Perimeter = _____

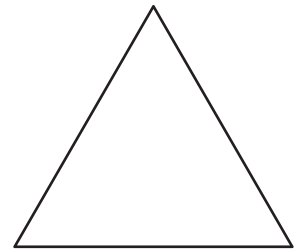
8)



13.5 yd

Perimeter = _____

9)



4.5 ft

Perimeter = _____