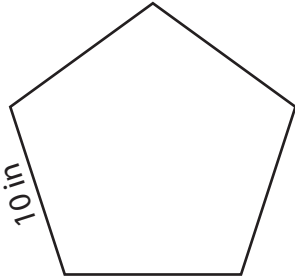


Perimeter of a Polygon

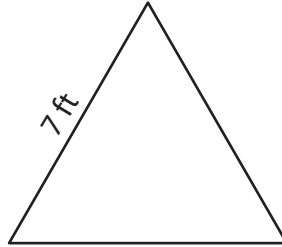
Find the perimeter of each regular polygon.

1)



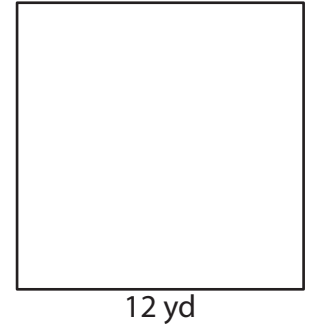
Perimeter = _____

2)



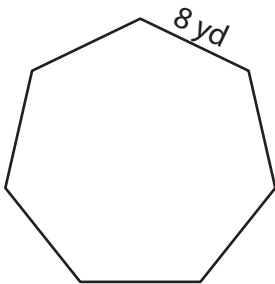
Perimeter = _____

3)



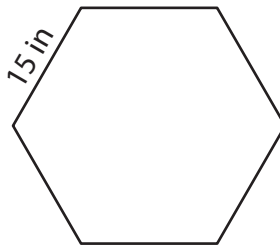
Perimeter = _____

4)



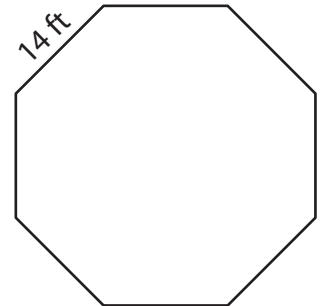
Perimeter = _____

5)



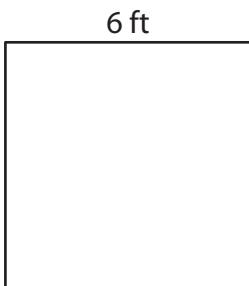
Perimeter = _____

6)



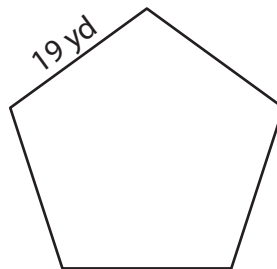
Perimeter = _____

7)



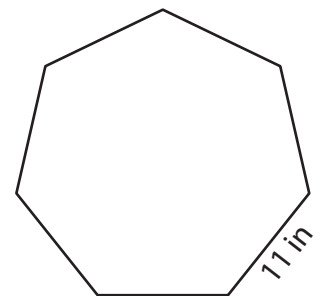
Perimeter = _____

8)



Perimeter = _____

9)



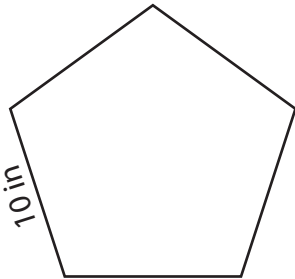
Perimeter = _____

Perimeter of a Polygon

Answer Key

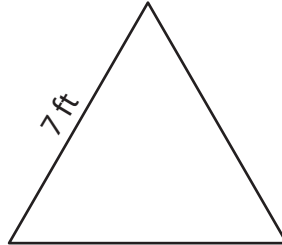
Find the perimeter of each regular polygon.

1)



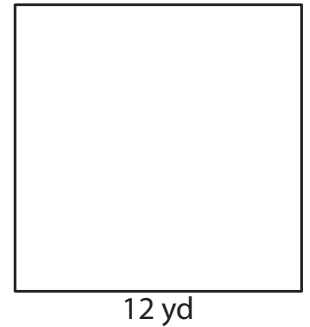
Perimeter = 50 in

2)



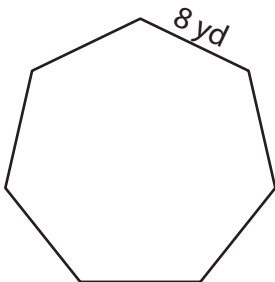
Perimeter = 21 ft

3)



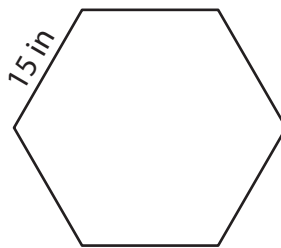
Perimeter = 48 yd

4)



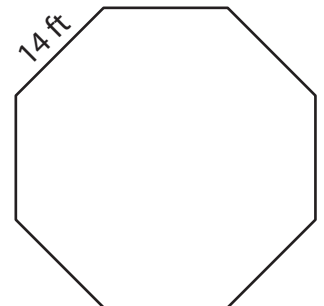
Perimeter = 56 yd

5)



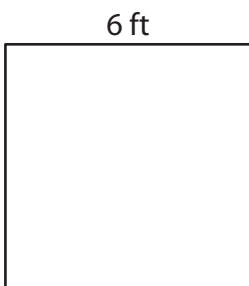
Perimeter = 90 in

6)



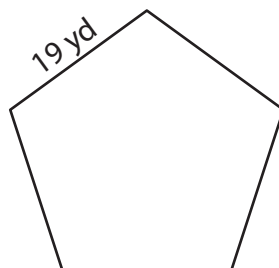
Perimeter = 112 ft

7)



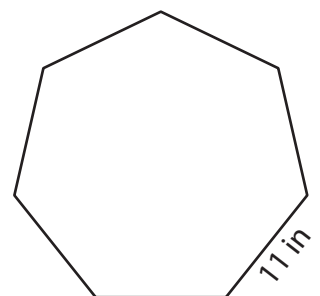
Perimeter = 24 ft

8)



Perimeter = 95 yd

9)



Perimeter = 77 in