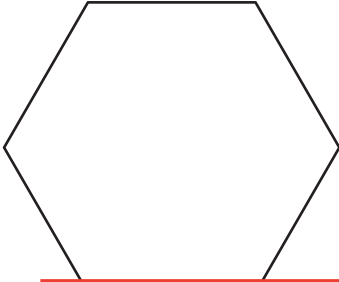


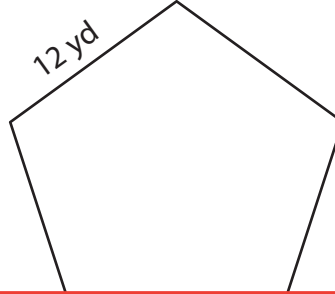
Perimeter of a Polygon

Find the perimeter of each regular polygon.

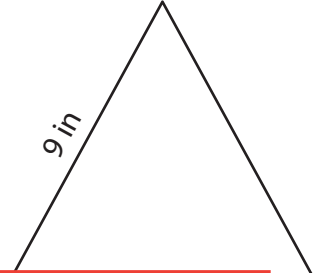
1)



2)



3)



Peri

Preview

4)

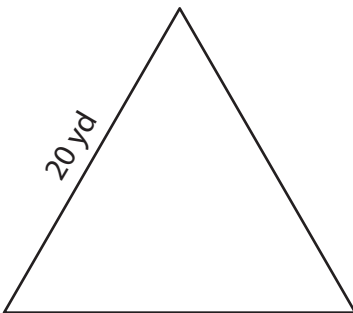
Become a member to unlock
unrestricted access to both printable
and online worksheets.



Peri

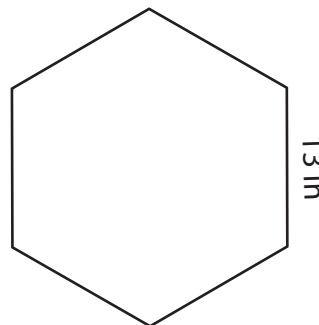
www.tutoringhour.com

7)



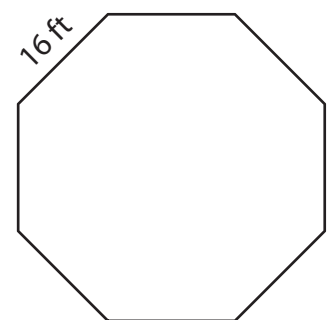
Perimeter = _____

8)



Perimeter = _____

9)



Perimeter = _____