


Polygons | Finding the Side Lengths

Find the side length of each regular polygon.

1)

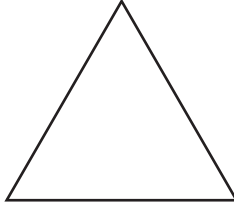


Perimeter = 76 m

Number of sides = _____

Length of each side = _____

2)

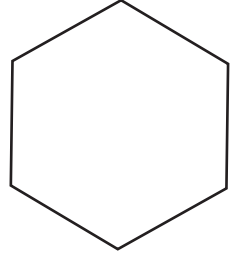


Perimeter = 18 mm

Number of sides = _____

Length of each side = _____

3)

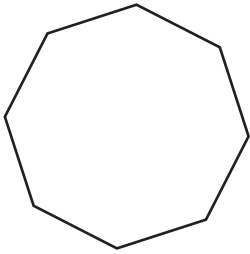


Perimeter = 222 cm

Number of sides = _____

Length of each side = _____

4)

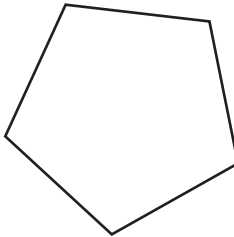


Perimeter = 64 mm

Number of sides = _____

Length of each side = _____

5)

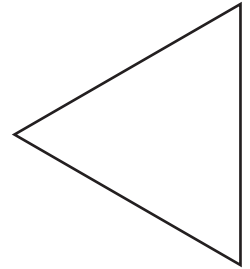


Perimeter = 160 cm

Number of sides = _____

Length of each side = _____

6)

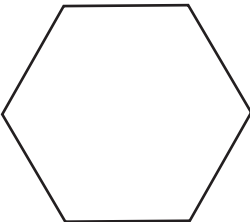


Perimeter = 75 m

Number of sides = _____

Length of each side = _____

7)




Perimeter = 66 cm

Number of sides = _____

Length of each side = _____

8)

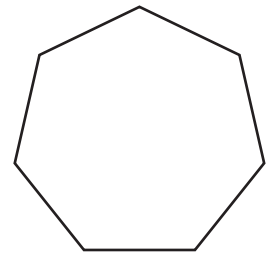


Perimeter = 104 m

Number of sides = _____

Length of each side = _____

9)



Perimeter = 63 mm

Number of sides = _____

Length of each side = _____