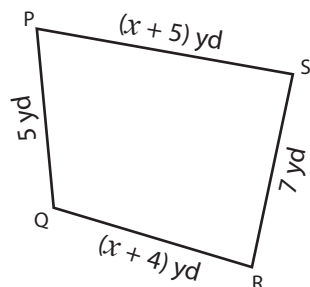


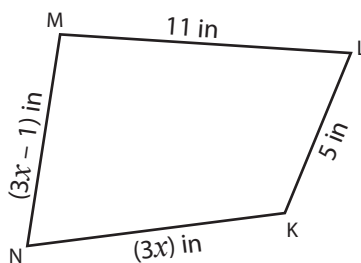
Perimeter of a Quadrilateral

Find the value of x . Figure out the length of each unknown side.

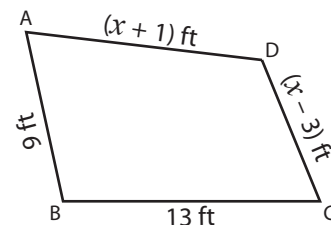
1)



2)



3)



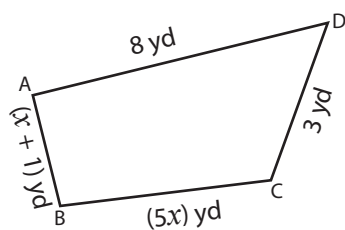
4)

Preview

Become a member to unlock
unrestricted access to both printable
and online worksheets.

www.tutoringhour.com

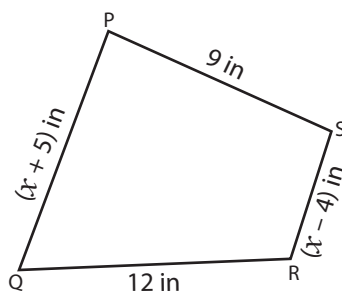
7)



Perimeter = 18 yd; $x =$ _____;

AB = _____; BC = _____

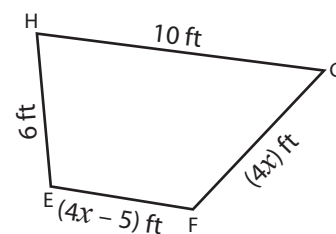
8)



Perimeter = 38 in; $x =$ _____;

PQ = _____; RS = _____

9)



Perimeter = 27 ft; $x =$ _____;

FG = _____; EF = _____