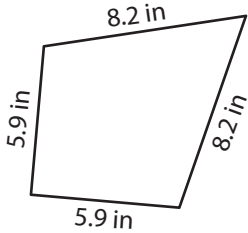


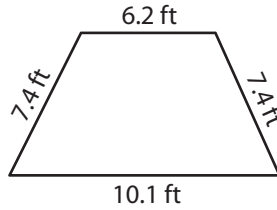
Perimeter of a Quadrilateral

Find the perimeter of each quadrilateral.

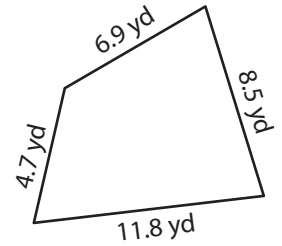
1)



2)



3)



4)

Peri

Preview

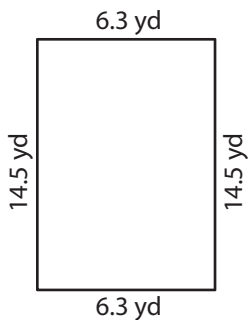
Become a member to unlock
unrestricted access to both printable
and online worksheets.



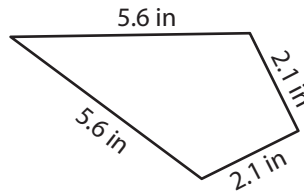
Peri

www.tutoringhour.com

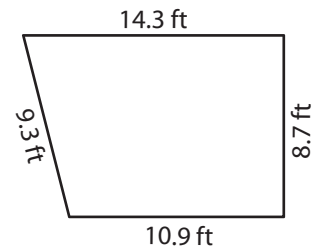
7)



8)



9)



Perimeter = _____

Perimeter = _____

Perimeter = _____