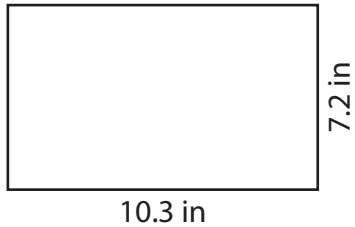


Perimeter of a Rectangle

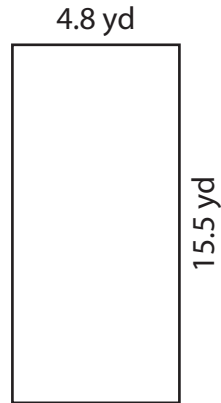
Find the perimeter of each rectangle.

1)



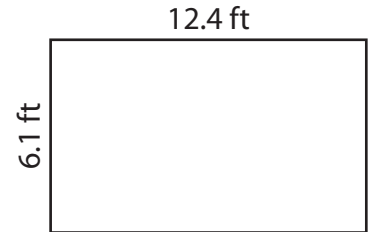
Perimeter = _____

2)



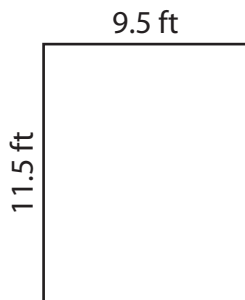
Perimeter = _____

3)



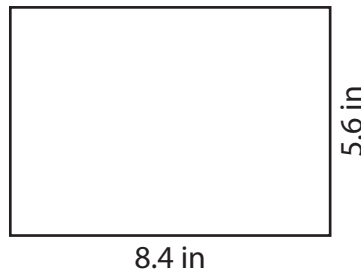
Perimeter = _____

4)



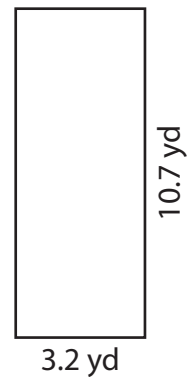
Perimeter = _____

5)



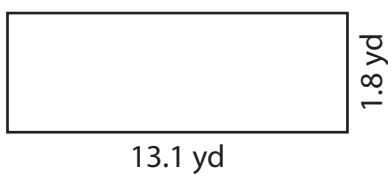
Perimeter = _____

6)



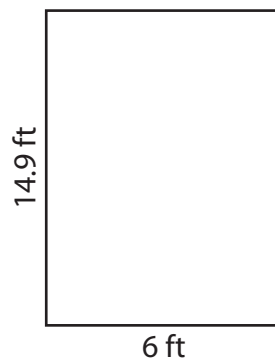
Perimeter = _____

7)



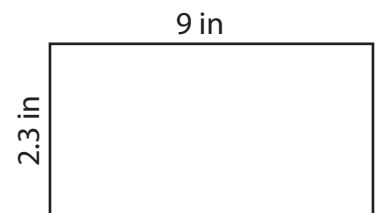
Perimeter = _____

8)



Perimeter = _____

9)



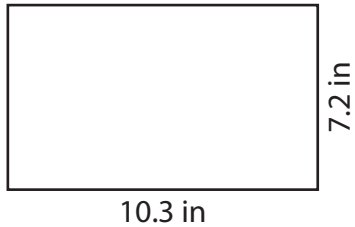
Perimeter = _____

Perimeter of a Rectangle

Answer Key

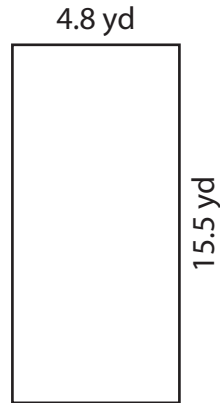
Find the perimeter of each rectangle.

1)



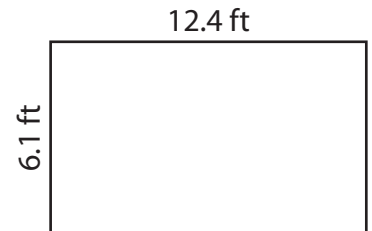
Perimeter = 35 in

2)



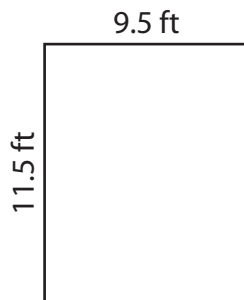
Perimeter = 40.6 yd

3)



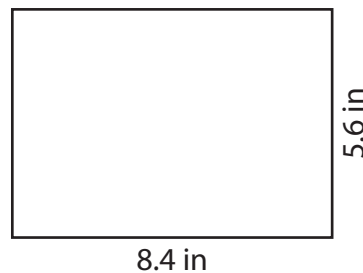
Perimeter = 37 ft

4)




Perimeter = 42 ft

5)



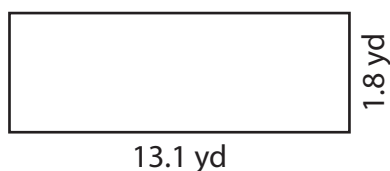
Perimeter = 28 in

6)



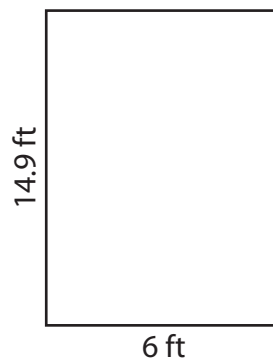
Perimeter = 27.8 yd

7)



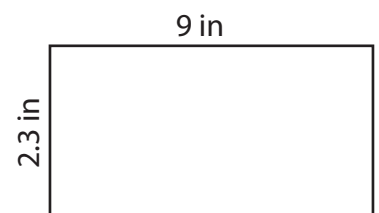
Perimeter = 29.8 yd

8)



Perimeter = 41.8 ft

9)



Perimeter = 22.6 in