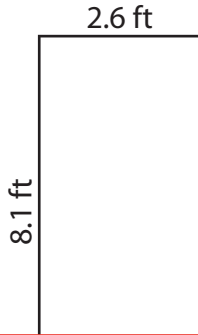



# Perimeter of a Rectangle

Find the perimeter of each rectangle.

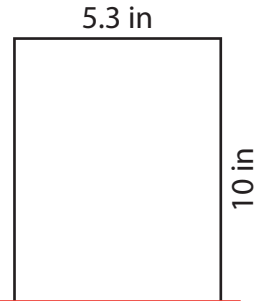
1)



2)



3)



Per

# Preview

4)



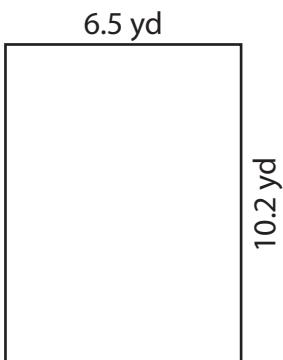
Become a member to unlock  
unrestricted access to both printable  
and online worksheets.

Per




[www.tutoringhour.com](http://www.tutoringhour.com)

7)



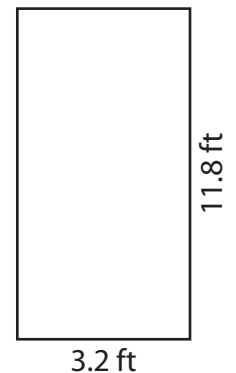
Perimeter = \_\_\_\_\_

8)



Perimeter = \_\_\_\_\_

9)



Perimeter = \_\_\_\_\_