

Perimeter of a Rectangle

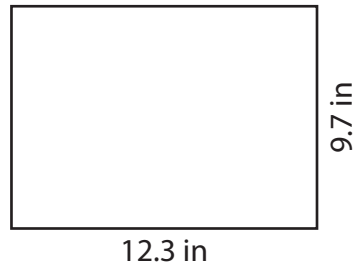
Find the perimeter of each rectangle.

1)



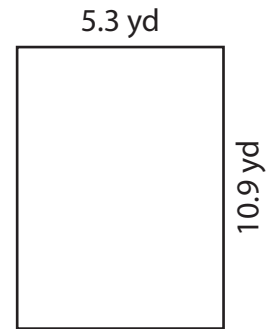
Perimeter = _____

2)




Perimeter = _____

3)




Perimeter = _____

4)




Perimeter = _____

5)



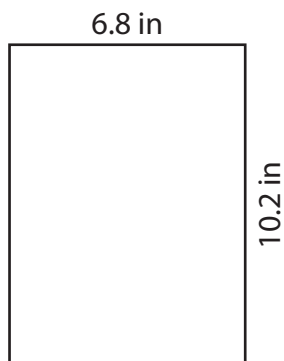
Perimeter = _____

6)



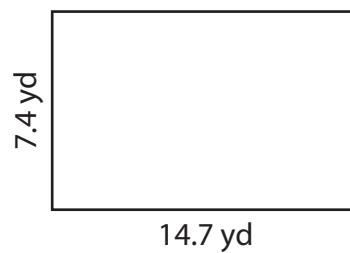
Perimeter = _____

7)



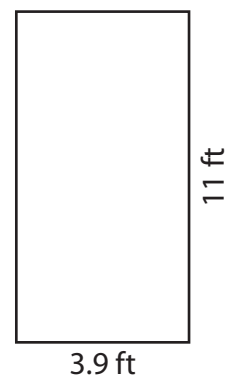
Perimeter = _____

8)



Perimeter = _____

9)



Perimeter = _____

Perimeter of a Rectangle

Answer Key

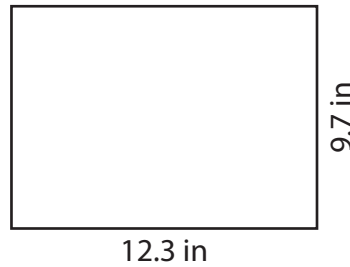
Find the perimeter of each rectangle.

1)



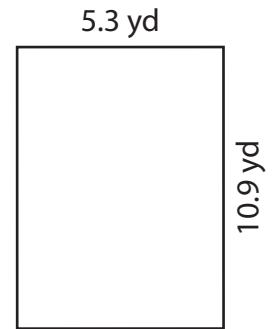
Perimeter = 22.2 ft

2)




Perimeter = 44 in

3)




Perimeter = 32.4 yd

4)




Perimeter = 48.2 yd

5)




Perimeter = 40.6 ft

6)



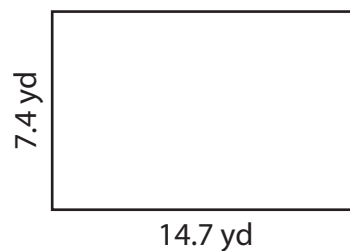
Perimeter = 52 in

7)



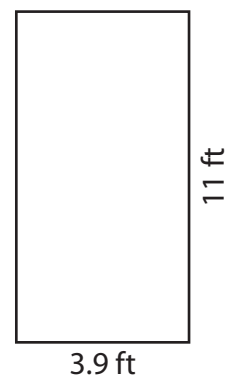
Perimeter = 34 in

8)



Perimeter = 44.2 yd

9)



Perimeter = 29.8 ft