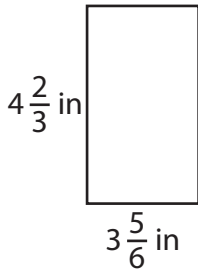


Perimeter of a Rectangle

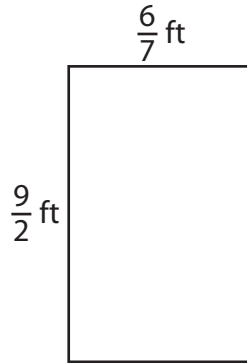
Find the perimeter of each rectangle.

1)



Perimeter = _____

2)



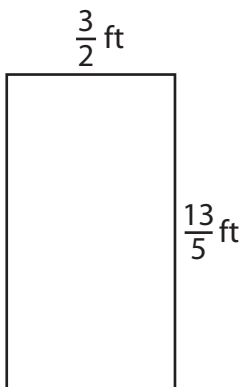
Perimeter = _____

3)



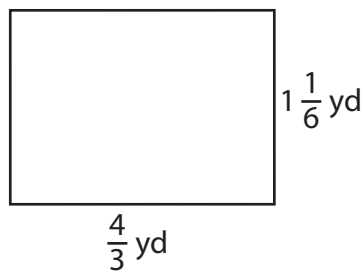
Perimeter = _____

4)



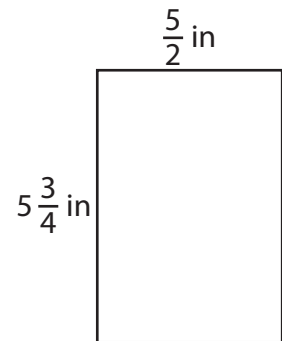
Perimeter = _____

5)



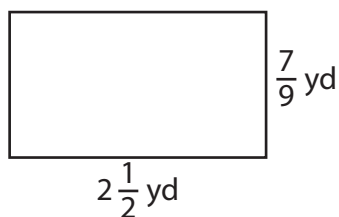
Perimeter = _____

6)



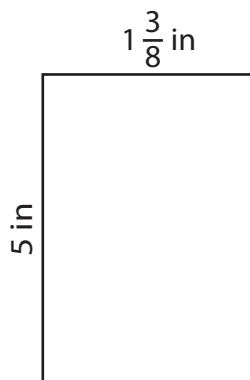
Perimeter = _____

7)



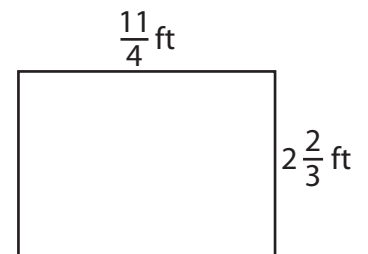
Perimeter = _____

8)



Perimeter = _____

9)



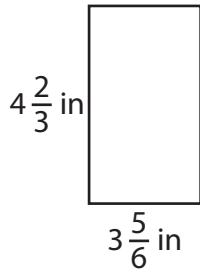
Perimeter = _____

Perimeter of a Rectangle

Answer Key

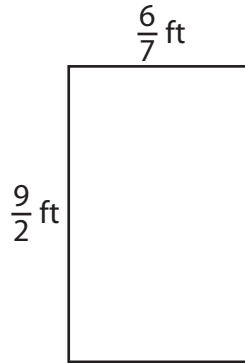
Find the perimeter of each rectangle.

1)



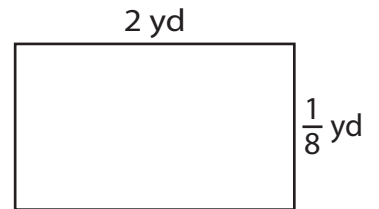
Perimeter = 17 in

2)



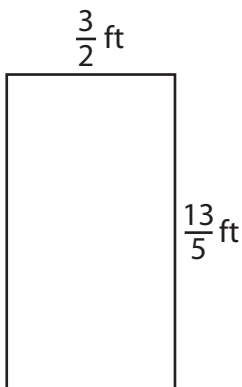
Perimeter = $\frac{75}{7}$ or $10\frac{5}{7}$ ft

3)



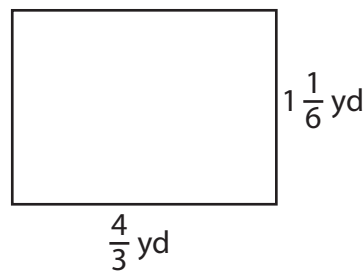
Perimeter = $\frac{17}{4}$ or $4\frac{1}{4}$ yd

4)



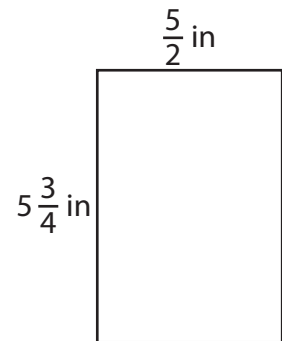
Perimeter = $\frac{41}{5}$ or $8\frac{1}{5}$ ft

5)



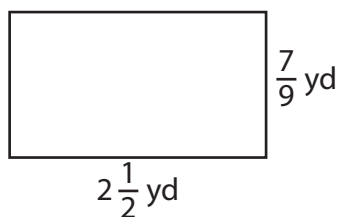
Perimeter = 5 yd

6)



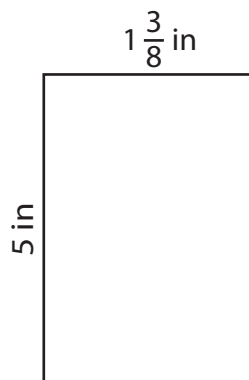
Perimeter = $\frac{33}{2}$ or $16\frac{1}{2}$ in

7)



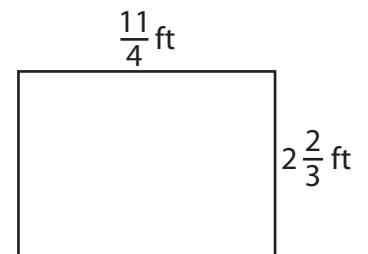
Perimeter = $\frac{59}{9}$ or $6\frac{5}{9}$ yd

8)



Perimeter = $\frac{51}{4}$ or $12\frac{3}{4}$ in

9)



Perimeter = $\frac{65}{6}$ or $10\frac{5}{6}$ ft