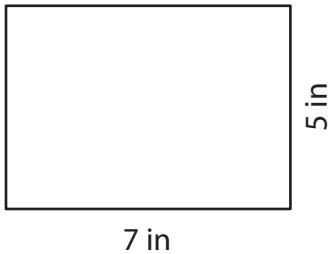


# Perimeter of a Rectangle

---

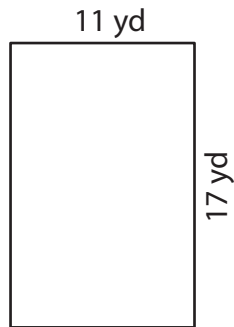
Find the perimeter of each rectangle.

1)



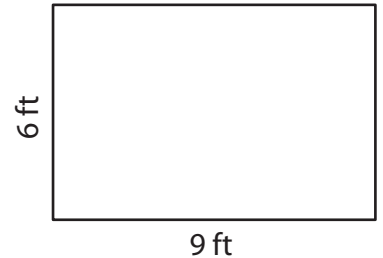
Perimeter = \_\_\_\_\_

2)



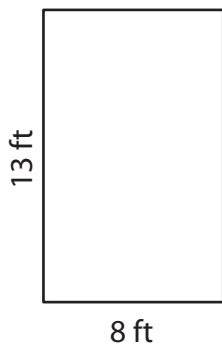
Perimeter = \_\_\_\_\_

3)



Perimeter = \_\_\_\_\_

4)



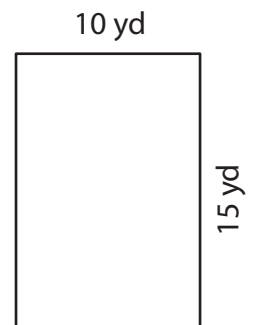
Perimeter = \_\_\_\_\_

5)



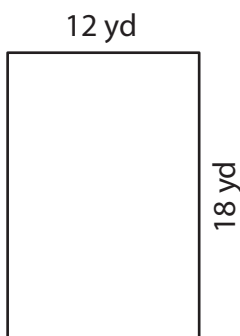
Perimeter = \_\_\_\_\_

6)



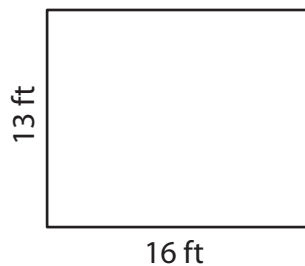
Perimeter = \_\_\_\_\_

7)



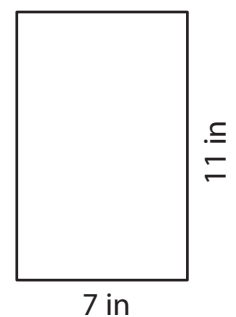
Perimeter = \_\_\_\_\_

8)



Perimeter = \_\_\_\_\_

9)



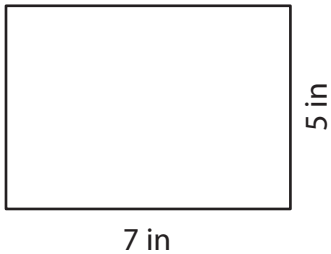
Perimeter = \_\_\_\_\_

# Perimeter of a Rectangle

Answer Key

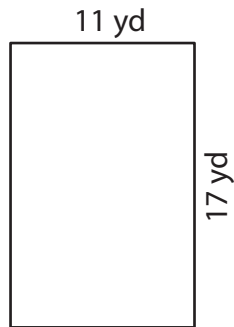
Find the perimeter of each rectangle.

1)



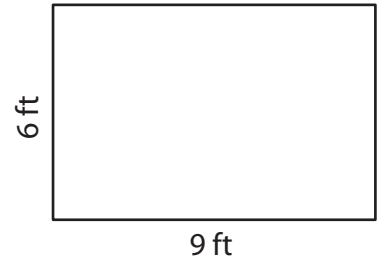
Perimeter = 24 in

2)



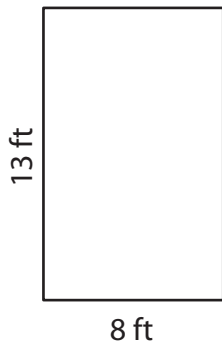
Perimeter = 56 yd

3)




Perimeter = 30 ft

4)



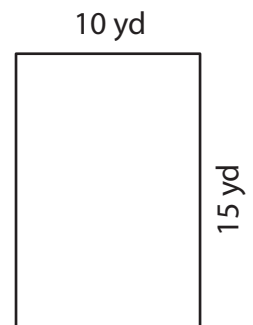
Perimeter = 42 ft

5)



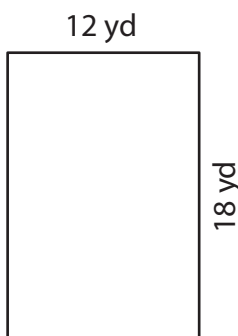
Perimeter = 68 in

6)



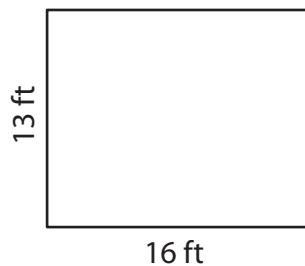
Perimeter = 50 yd

7)



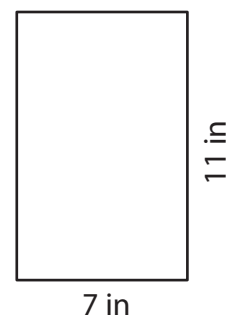
Perimeter = 60 yd

8)



Perimeter = 58 ft

9)



Perimeter = 36 in