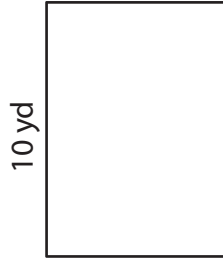


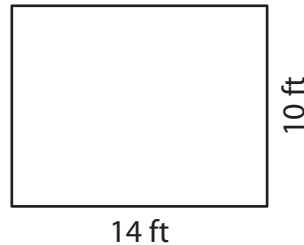
Perimeter of a Rectangle

Find the perimeter of each rectangle.

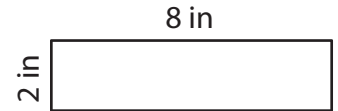
1)



2)



3)



Per

Preview

4)

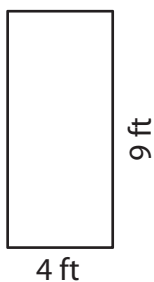
Become a member to unlock
unrestricted access to both printable
and online worksheets.

Per

www.tutoringhour.com

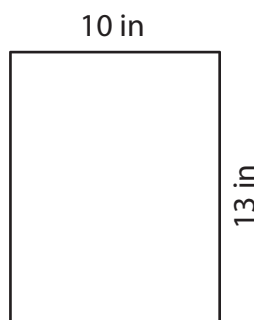


7)



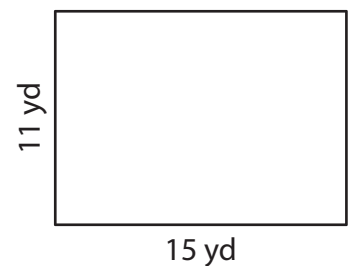
Perimeter = _____

8)



Perimeter = _____

9)



Perimeter = _____