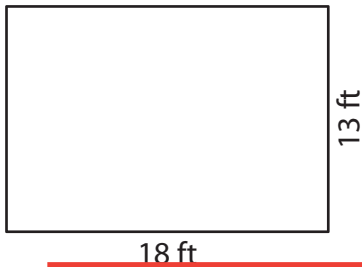


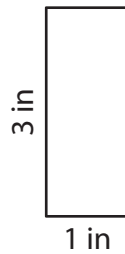
# Perimeter of a Rectangle

Find the perimeter of each rectangle.

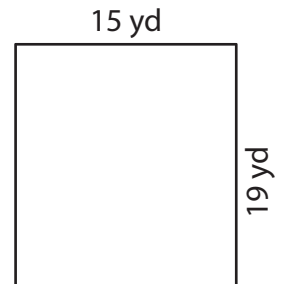
1)



2)



3)



Per

# Preview

4)

Become a member to unlock  
unrestricted access to both printable  
and online worksheets.

Per

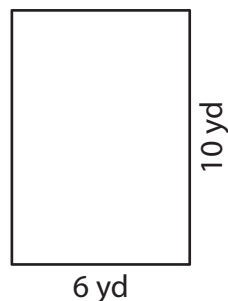
www.tutoringhour.com



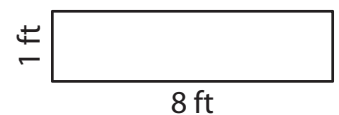
7)



8)



9)



Perimeter = \_\_\_\_\_

Perimeter = \_\_\_\_\_

Perimeter = \_\_\_\_\_