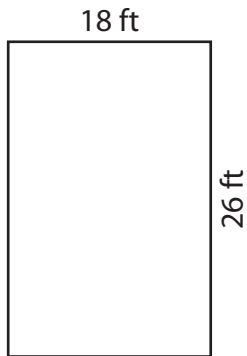


Perimeter of a Rectangle

Find the perimeter of each rectangle.

1)




Perimeter = _____

2)




Perimeter = _____

3)



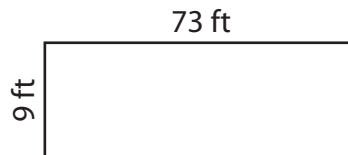
Perimeter = _____

4)



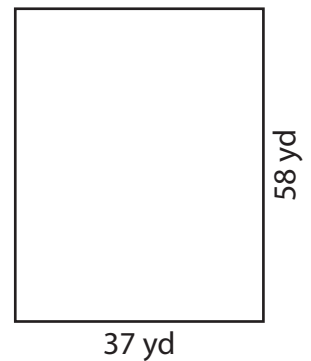
Perimeter = _____

5)



Perimeter = _____

6)




Perimeter = _____

7)



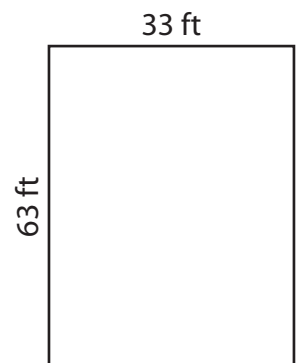
Perimeter = _____

8)



Perimeter = _____

9)



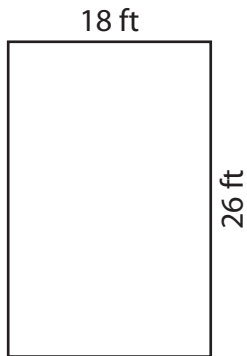
Perimeter = _____

Perimeter of a Rectangle

Answer Key

Find the perimeter of each rectangle.

1)




Perimeter = 88 ft

2)




Perimeter = 108 yd

3)



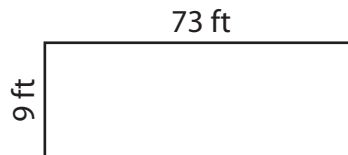
Perimeter = 124 in

4)



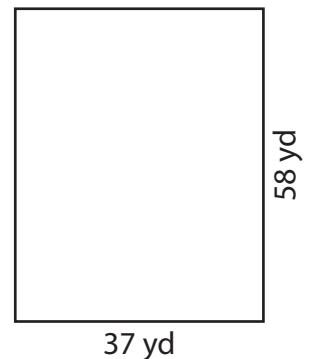
Perimeter = 120 in

5)



Perimeter = 164 ft

6)




Perimeter = 190 yd

7)



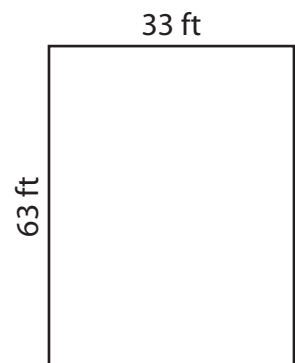
Perimeter = 146 yd

8)



Perimeter = 140 in

9)



Perimeter = 192 ft