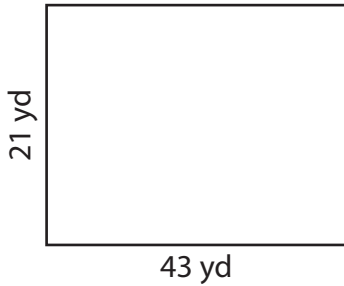


Perimeter of a Rectangle

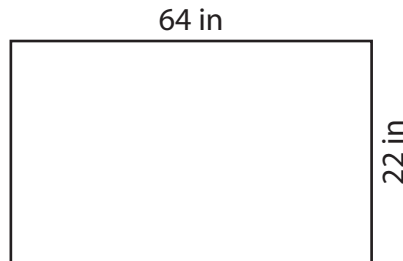
Find the perimeter of each rectangle.

1)



Perimeter = _____

2)



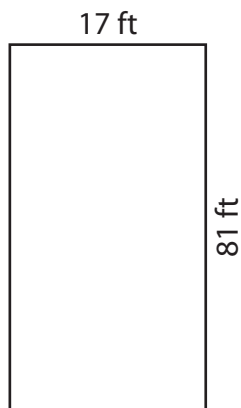
Perimeter = _____

3)



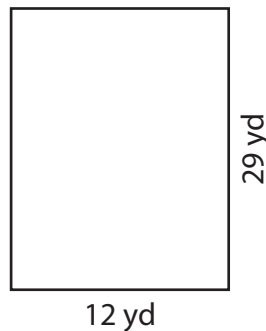
Perimeter = _____

4)



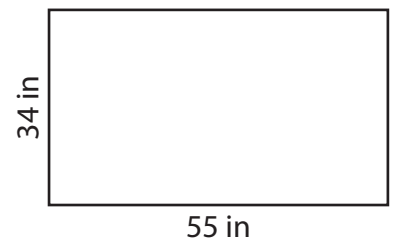
Perimeter = _____

5)



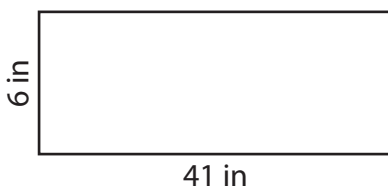
Perimeter = _____

6)



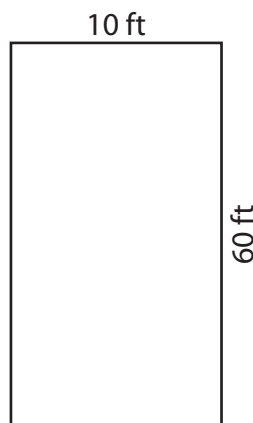
Perimeter = _____

7)



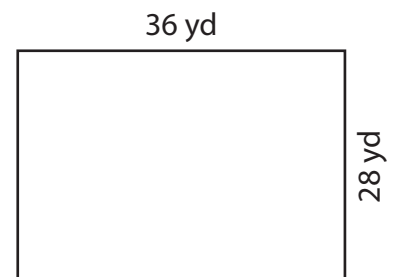
Perimeter = _____

8)



Perimeter = _____

9)



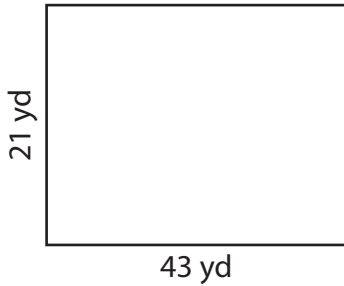
Perimeter = _____

Perimeter of a Rectangle

Answer Key

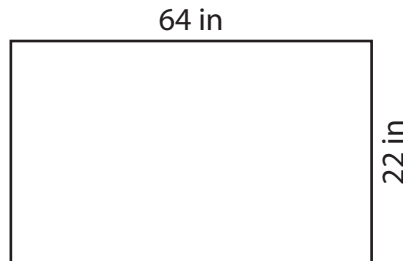
Find the perimeter of each rectangle.

1)



Perimeter = 128 yd

2)



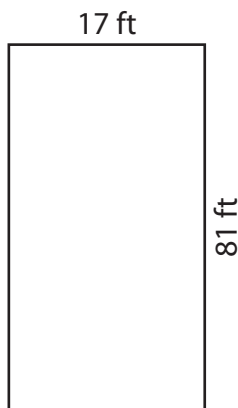
Perimeter = 172 in

3)



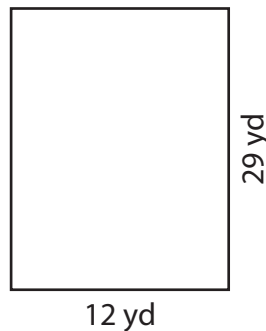
Perimeter = 96 ft

4)



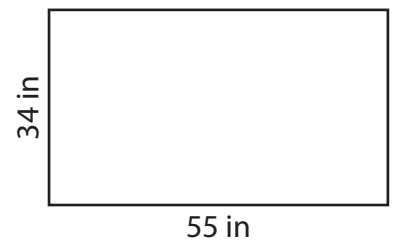
Perimeter = 196 ft

5)




Perimeter = 82 yd

6)



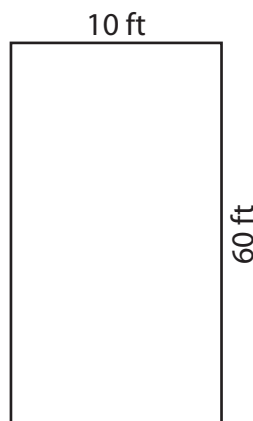
Perimeter = 178 in

7)



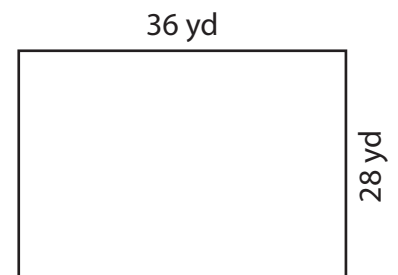
Perimeter = 94 in

8)



Perimeter = 140 ft

9)



Perimeter = 128 yd