


Finding the Length or Width from Perimeter


Find the length or width of each rectangle.

1) Perimeter = 38 yd



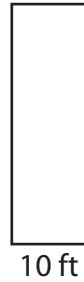
Length = _____

2) Perimeter = 44 in



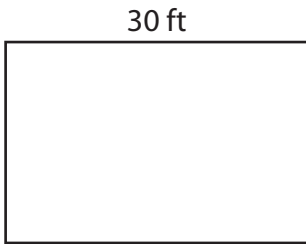
Width = _____

3) Perimeter = 72 ft



Length = _____

4) Perimeter = 100 ft



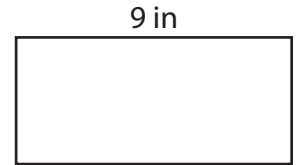
Width = _____

5) Perimeter = 86 yd



Length = _____

6) Perimeter = 30 in



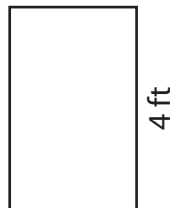
Width = _____

7) Perimeter = 58 in




Length = _____

8) Perimeter = 12 ft



Width = _____

9) Perimeter = 64 yd



Length = _____