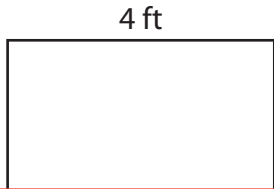



Finding the Length or Width from Perimeter

Find the length or width of each rectangle.

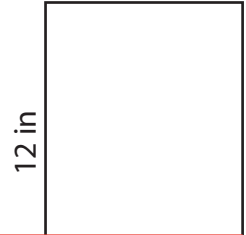
1) Perimeter = 14 ft



2) Perimeter = 42 yd



3) Perimeter = 36 in



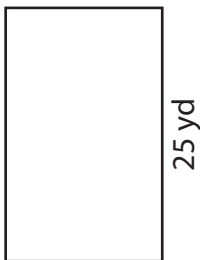
Preview

Become a member to unlock
unrestricted access to both printable
and online worksheets.



www.tutoringhour.com

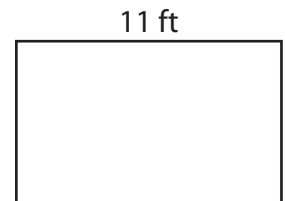
7) Perimeter = 84 yd



8) Perimeter = 60 in



9) Perimeter = 32 ft



Width = _____

Length = _____

Width = _____