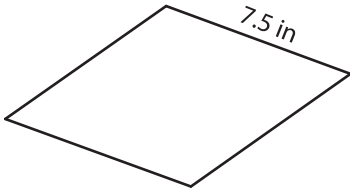


# Perimeter of a Rhombus


Find the perimeter of each rhombus.

1)



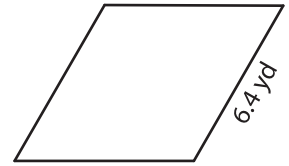
Perimeter = \_\_\_\_\_

2)



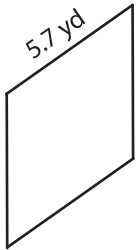
Perimeter = \_\_\_\_\_

3)



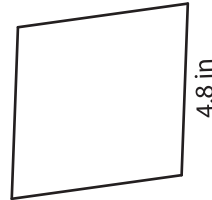
Perimeter = \_\_\_\_\_

4)




Perimeter = \_\_\_\_\_

5)



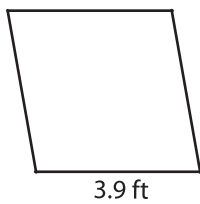
Perimeter = \_\_\_\_\_

6)



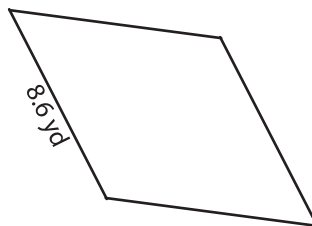
Perimeter = \_\_\_\_\_

7)



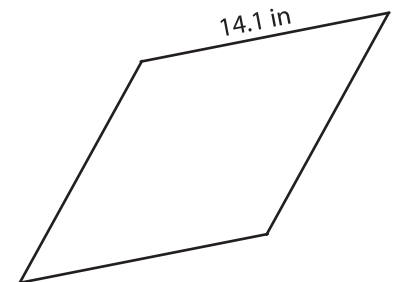
Perimeter = \_\_\_\_\_

8)



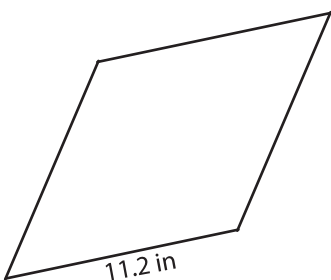
Perimeter = \_\_\_\_\_

9)



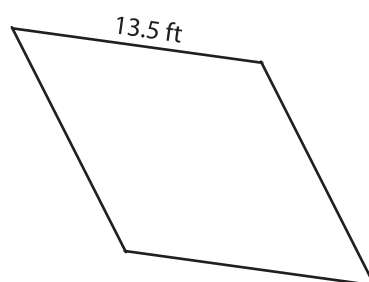
Perimeter = \_\_\_\_\_

10)



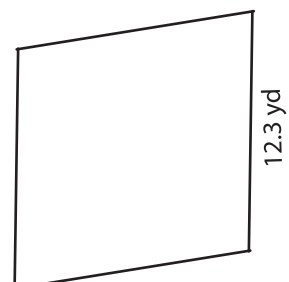
Perimeter = \_\_\_\_\_

11)



Perimeter = \_\_\_\_\_

12)



Perimeter = \_\_\_\_\_