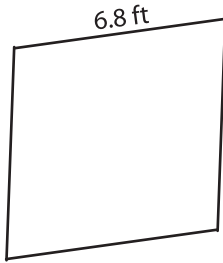


Perimeter of a Rhombus

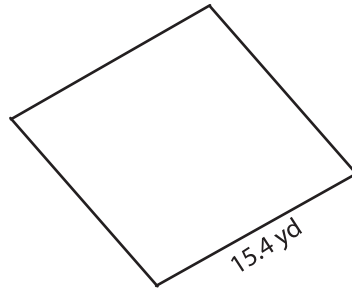
Find the perimeter of each rhombus.

1)



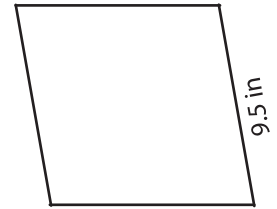
Perimeter = _____

2)



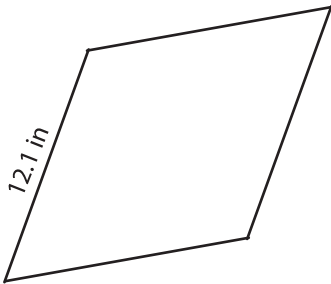
Perimeter = _____

3)



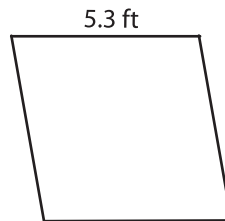
Perimeter = _____

4)



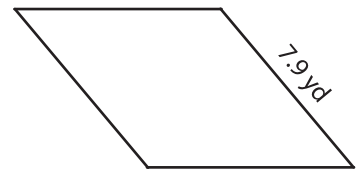
Perimeter = _____

5)



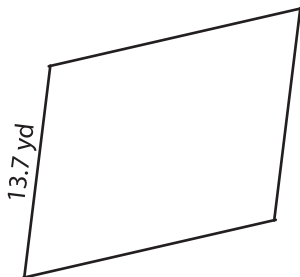
Perimeter = _____

6)



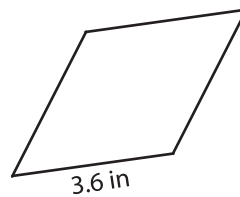
Perimeter = _____

7)



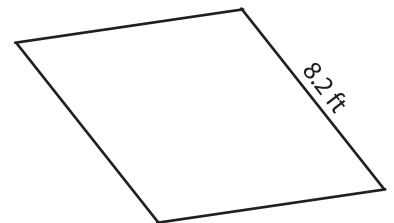
Perimeter = _____

8)



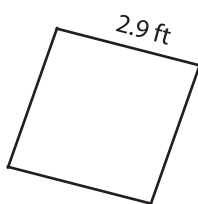
Perimeter = _____

9)



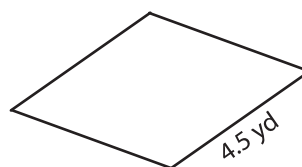
Perimeter = _____

10)



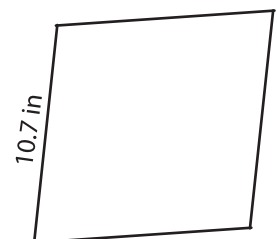
Perimeter = _____

11)



Perimeter = _____

12)



Perimeter = _____